



# EDUHEAL FOUNDATION



## INTERACTIVE OLYMPIADS

EDUHEAL FOUNDATION CONDUCTS 6 OLYMPIADS ANNUALLY REACHING OUT TO 3,500 + SCHOOLS  
• 4 LAKH + STUDENTS • 50,000 COORDINATING TEACHERS AND HAVING 500 RESOURCE PERSONS  
IN ENGLISH / MATHS / SCIENCE / BIOTECH / COMPUTER / G.K. & 300 REGIONAL COORDINATORS.

WEBSITE : [WWW.EDUHEALFOUNDATION.ORG](http://WWW.EDUHEALFOUNDATION.ORG) • E-MAIL : [EDUHEALFOUNDATION@GMAIL.COM](mailto:EDUHEALFOUNDATION@GMAIL.COM)

<b>ICO</b> INTERNATIONAL CYBER OLYMPIAD	<b>NISO</b> NATIONAL INTERACTIVE SCIENCE OLYMPIAD	<b>NIMO</b> NATIONAL INTERACTIVE MATHS OLYMPIAD	<b>NBTO</b> NATIONAL BIOTECHNOLOGY OLYMPIAD	<b>IEO</b> INTERNATIONAL ENGLISH OLYMPIAD	<b>IGO</b> INTERNATIONAL G.K. OLYMPIAD
---	---	---	--	---	--

**INTERNATIONAL  
CYBER  
OLYMPIAD**

**ICO**

**1**  
Class

**A1**  
Paper  
Code

Academic Partner [WWW.EDUSYS.IN](http://WWW.EDUSYS.IN)

**EtG**  
BOOKS

Creating  
**SUCCESS**  
Stories

A Unit of EDUSYS LEARNING MEDIA

AIEEE • IIT • PMT • OLYMPIADS

### IMPORTANT INFORMATION




- You are allowed additional 10 minutes to fill the required details in the **RESPONSE SHEET**.
- The question paper is made as per syllabus guidelines & pattern given in the information Booklet. The Question Paper for Classes 1 to 6 contains 25 Questions each to be answered in 40 minutes. The Question paper for classes 7 to 12 contains 50 Questions each to be answered in 60 minutes. All questions are compulsory. Further instructions are given in the instruction letter to the coordinator teacher.
- Use the response sheet to mark your responses by darkening the required circle. The response sheet has to be returned to the foundation, duly filled in. The student can retain the Question Paper.

### MENTAL ABILITY




1. Which one of these three is least like the other two?

- (1) Sunday                      (2) Holiday  
(3) Monday                     (4) None of these



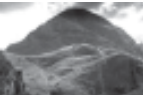
2. Find out which figure is different from other two.

- (1)                       (2) 
- (3)                       (4) None of these

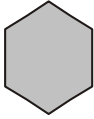



3. Which is the greatest number?

- (1)                       (2) 
- (3)                       (4) None of these

4. Which of the following is a man made thing?




- (1)                       (2) 
- (3)                       (4) None of these

5. From which figure this part is cut




- 
- (1)                       (2) 
- (3)                       (4) None of these

## COMPUTERS

6. Which of the following is used for calculation?

- (1)  (2) 
- (3)  (4) None of these

7. Which of the following is used for typing letters?

- (1)  (2) 
- (3)  (4) None of these

8. This machine works by :



- (1) Electricity (2) Oil  
(3) CNG (4) None of these

9. Name the following.



- (1) Mouse (2) Keyboard  
(3) Calculation (4) None of these

10. A printer is used to

- (1) Listen Music (2) Store computer data  
(3) Print words on paper (4) None of these

11. Speakers are mainly used for

- (1) Listening music (2) Drawing  
(3) Playing games (4) None of these

12. This window is used for :



- (1) Painting (2) Data Entry  
(3) Games (4) None of these

13. Keyboard is



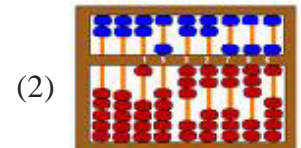
- (1) Input device (2) Output device  
(3) Both (1) and (2) (4) None of these




14. Name the following.



- (1) T. V. (2) Calculator  
(3) Monitor (4) None of these

15. Which one of the following is a modern electronic machine, which can store data and information?




- (1)  (2) 
- (3)  (4) None of these

16. Which is the TRUE statement about CPU of Computer?

- (1) It is known as the brain of the computer.  
(2) CPU looks like a TV screen.  
(3) CPU is used for Typewriting.  
(4) None of these

17. A small device that is used to control pointer on the screen is called.

- (1)  (2) 
- (3)  (4) None of these

18. In Railway station computers are used for \_\_\_\_\_.

- (1) Music (2) Drawing cartoons  
(3) Tickets (4) None of these

19. Laptop is also a Computer System.

- (1) True (2) False  
(3) Can't say (4) None of these

20. Which one of the following is true statement?

- (1) Computer is a Machine  
(2) Computer can do calculation.  
(3) Both (1) & (2)  
(4) None of these

### ETG INTERACTIVE SECTION

For Question - 21 to 24,

Count the number of monitors, keyboards, CPUs and mouses.



21. Number of Keyboards

- (1) 3 (2) 2  
(3) 4 (4) None of these

22. Number of CPUs

- (1) 3 (2) 2  
(3) 1 (4) None of these




23. Number of Mouses

- (1) 4 (2) 3  
(3) 2 (4) None of these

24. Number of Monitors

- (1) 3 (2) 2  
(3) 4 (4) None of these

25. Which one is a computer from the following figures?

- (1)  (2) 
- (3)  (4) None of these



**END OF THE EXAM**

**ROUGH PAGE**