



# EDUHEAL FOUNDATION



## INTERACTIVE OLYMPIADS

EDUHEAL FOUNDATION CONDUCTS 6 OLYMPIADS ANNUALLY REACHING OUT TO 3,500 + SCHOOLS  
• 4 LAKH + STUDENTS • 50,000 COORDINATING TEACHERS AND HAVING 500 RESOURCE PERSONS  
IN ENGLISH / MATHS / SCIENCE / BIOTECH / COMPUTER / G.K. & 300 REGIONAL COORDINATORS.

WEBSITE : [WWW.EDUHEALFOUNDATION.ORG](http://WWW.EDUHEALFOUNDATION.ORG) • E-MAIL : [EDUHEALFOUNDATION@GMAIL.COM](mailto:EDUHEALFOUNDATION@GMAIL.COM)

<b>ICO</b> INTERNATIONAL CYBER OLYMPIAD	<b>NISO</b> NATIONAL INTERACTIVE SCIENCE OLYMPIAD	<b>NIMO</b> NATIONAL INTERACTIVE MATHS OLYMPIAD	<b>NBTO</b> NATIONAL BIOTECHNOLOGY OLYMPIAD	<b>IEO</b> INTERNATIONAL ENGLISH OLYMPIAD	<b>IGO</b> INTERNATIONAL G.K. OLYMPIAD
---	---	---	--	---	--

**INTERNATIONAL  
CYBER  
OLYMPIAD**

**ICO**

**2**  
Class

**A1**  
Paper  
Code

Academic Partner [WWW.EDUSYS.IN](http://WWW.EDUSYS.IN)

**EtG**  
BOOKS

Creating  
**SUCCESS**  
Stories

A Unit of EDUSYS LEARNING MEDIA

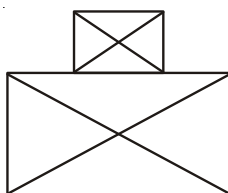
AIEEE • IIT • PMT • OLYMPIADS

### IMPORTANT INFORMATION

- You are allowed additional 10 minutes to fill the required details in the **RESPONSE SHEET**.
- The question paper is made as per syllabus guidelines & pattern given in the information Booklet. The Question Paper for Classes 1 to 6 contains 25 Questions each to be answered in 40 minutes. The Question paper for classes 7 to 12 contains 50 Questions each to be answered in 60 minutes. All questions are compulsory. Further instructions are given in the instruction letter to the coordinator teacher.
- Use the response sheet to mark your responses by darkening the required circle. The response sheet has to be returned to the foundation, duly filled in. The student can retain the Question Paper.

### MENTAL ABILITY



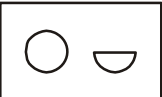
- 'Video' is related to 'Cassette' in the same way as 'Computer' is related to :  
(1) Reels (2) C. D.  
(3) Files (4) None of these
- Which one of these three is least like the other two?  
(1) Doctor (2) School  
(3) Nurse (4) None of these
- Find the odd one out.  
(1) Green (2) Red  
(3) Color (4) None of these
- How many rectangles are there in the given figure?



- (1) 1 (2) 2  
(3) 7 (4) None of these

- What comes in place of '?'



- (1)  (2) 
- (3)  (4) None of these

### COMPUTERS

- Name the following device.



- (1) PC (2) T. V.  
(3) Laptop (4) None of these

7. This is used for :



- (1) Make number big
- (2) Make alphabet big
- (3) Draw picture
- (4) None of these

8. Speakers are used for :



- (1) Typing
- (2) Watching Movie
- (3) Listen music
- (4) None of these

9. This mouse button is used for



- (1) Left click
- (2) Right click
- (3) Both (1) & (2)
- (4) None of these

10. The front of the monitor is called \_\_\_\_\_.

- (1) Key-pad
- (2) Screen
- (3) T. V.
- (4) None of these




11. Which of the following is true?

- (1) A computer is a machine that runs on electricity.
- (2) A computer can do several things. It makes our work easier and faster.
- (3) Both of above
- (4) None of these

12. Which of the following is false :

- (1) A computer can help you play games.
- (2) A computer works slowly.
- (3) A computer can remember many things.
- (4) None of these




13. Identify the device used to store huge data.

- (1) 
- (2) 
- (3) 
- (4) None of these

14. The correct sequence to start a computer : (when Electric Switch is already on)

- (1) CPU on -> UPS on -> Monitor on
- (2) UPS on -> CPU on -> Monitor on
- (3) Monitor on -> CPU on -> UPS on
- (4) None of these

15. In a sky fight video game, for moving a plane, which device is more easy to use :

- (1) 
- (2) 
- (3) 
- (4) None of these




16. Mouse is used to :

- (1) Move an object on screen of computer
- (2) Store data in memory
- (3) Play cricket
- (4) None of these




17. Are all machines man made?

- (1) True
- (2) False
- (3) Can't say
- (4) None of these







18. Choose one device that looks like T.V. but is a part of a computer :

- (1) 
- (2) 
- (3) 
- (4) None of these

19. Which one of the following is a keyboard?

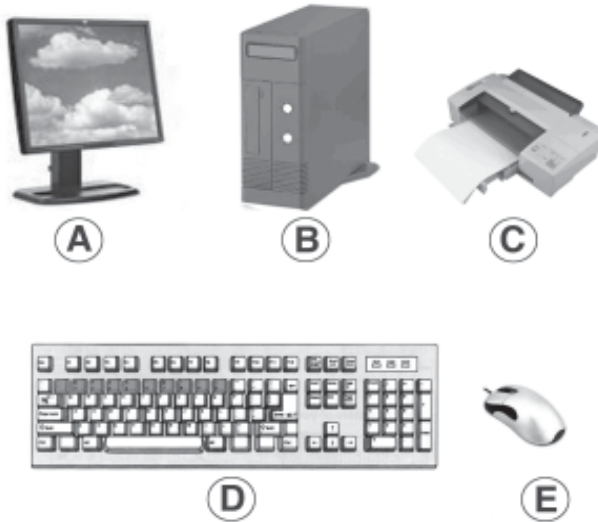
- (1)  (2)   
(3)  (4) None of these

20. Which key should you use to write a name?

- (1) Alphabet keys    
(2) Number keys    
(3) Arrow keys    
(4) None of these

### EtG INTERACTIVE SECTION

Using the given figures answer question 21 to 25.



21. Which is CPU

- (1) A (2) B  
(3) C (4) None of these

22. Which is Keyboard

- (1) A (2) D  
(3) C (4) None of these

23. Which is Monitor

- (1) A (2) B  
(3) C (4) None of these

24. Which is Mouse

- (1) A (2) E  
(3) C (4) None of these

25. Which is Printer

- (1) A (2) B  
(3) C (4) None of these



**END OF THE EXAM**

**ROUGH PAGE**