



EDUHEAL FOUNDATION



INTERACTIVE OLYMPIADS

EDUHEAL FOUNDATION CONDUCTS 6 OLYMPIADS ANNUALLY REACHING OUT TO 3,500 + SCHOOLS
• 4 LAKH + STUDENTS • 50,000 COORDINATING TEACHERS AND HAVING 500 RESOURCE PERSONS
IN ENGLISH / MATHS / SCIENCE / BIOTECH / COMPUTER / G.K. & 300 REGIONAL COORDINATORS.

WEBSITE : WWW.EDUHEALFOUNDATION.ORG • E-MAIL : EDUHEALFOUNDATION@GMAIL.COM

ICO INTERNATIONAL CYBER OLYMPIAD	NISO NATIONAL INTERACTIVE SCIENCE OLYMPIAD	NIMO NATIONAL INTERACTIVE MATHS OLYMPIAD	NBTO NATIONAL BIOTECHNOLOGY OLYMPIAD	IEO INTERNATIONAL ENGLISH OLYMPIAD	IGO INTERNATIONAL G.K. OLYMPIAD
---	---	---	--	---	--

Academic Partner WWW.EDUSYS.IN

Creating **SUCCESS** Stories

A Unit of EDUSYS LEARNING MEDIA

AIEEE • IIT • PMT • OLYMPIADS

**INTERNATIONAL
CYBER
OLYMPIAD**

ICO

3
Class

A1
Paper
Code

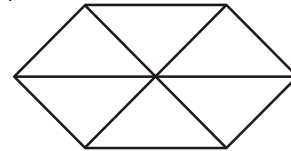
IMPORTANT INFORMATION

- You are allowed additional 10 minutes to fill the required details in the **RESPONSE SHEET**.
- The question paper is made as per syllabus guidelines & pattern given in the information Booklet. The Question Paper for Classes 1 to 6 contains 25 Questions each to be answered in 40 minutes. The Question paper for classes 7 to 12 contains 50 Questions each to be answered in 60 minutes. All questions are compulsory. Further instructions are given in the instruction letter to the coordinator teacher.
- Use the response sheet to mark your responses by darkening the required circle. The response sheet has to be returned to the foundation, duly filled in. The student can retain the Question Paper.

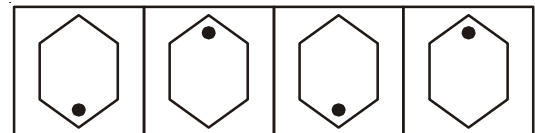
MENTAL ABILITY

- Earth : Sun :: Moon : ?**
(1) Earth (2) Sky
(3) Star (4) None of these
- Find out which figure is different from other two.
(1) (2)
(3) (4) None of these
- From the following 5 numbers, 4 of them are related and one is different. Find the odd one out.
7, 8, 14, 21, 28
(1) 7 (2) 8
(3) 21 (4) None of these

- How many triangles are there in this shape?



- (1) 5 (2) 6
(3) 8 (4) None of these
- Which figure will come next?



COMPUTERS

6. Windows XP is a




- (1) Operating System (2) Hardware
(3) Editor (4) None of these

7. This is used to/for



- (1) Listen Music (2) Dumping unused files
(3) Typing Letter (4) None of these

8. Which is used to close window



- (1) A (2) B
(3) C (4) None of these

9. A mouse can be used to

- (1) Point (2) Click
(3) Both (1) & (2) (4) None of these

10. While operating the computer, one should sit exactly in front of the keyboard and

- (1) CPU (2) Printer
(3) Monitor (4) None of these

11. All the programs running on your computer are displayed on

- (1) Task bar (2) Title bar
(3) Menu bar (4) None of these

12. Shut down option is located on

- (1) Sub menu (2) Start menu
(3) Exit menu (4) None of these

13. The _____ is a logical area on the hard disk or floppy disk where files are kept.

- (1) Shortcut (2) Folder
(3) Both (1) & (2) (4) None of these

14. The full form of VSNL?

- (1) Vidya Sanchar Nigam Limited
(2) Videsh Swadesh Nigam Limited
(3) Videsh Sanchar Nigam Limited
(4) None of these

15. In windows 'start' button is located on the top of the _____ bar.

- (1) Task (2) Menu
(3) Title (4) None of these

16. The first screen, we see after booting up the computer, is called _____?

- (1) Display (2) Desktop
(3) Wallpaper (4) None of these

17. _____ is known as the brain of the computer.

- (1) CPU (2) Control Unit
(3) Monitor (4) None of these

18. Windows is a popular Operating System. Which company made this Software?

- (1) IBM (2) INTEL
(3) Microsoft (4) None of these

19. Computers are used for :

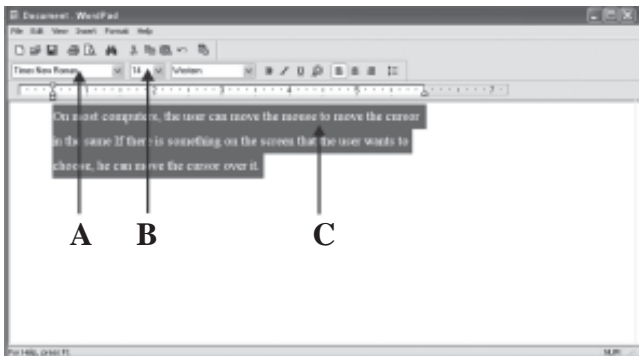
- (1) Doing calculations (2) Entertainment
(3) Both (1) & (2) (4) None of these

20. A computer we use for personal use is called?

- (1) AC (2) PC
(3) IC (4) None of these

ICG INTERACTIVE SECTION

Using the given figure answer question 21 to 23.



21. What is shown by pointer A

- (1) Font style
- (2) Font size
- (3) Font color
- (4) None of these



22. What is shown by pointer B

- (1) Font style
- (2) Font size
- (3) Font name
- (4) None of these




23. What is shown by pointer C

- (1) Help menu
- (2) Selected image
- (3) Selected text
- (4) None of these

24. The key that erases characters of the left side is

- (1) 
- (2) 
- (3) 
- (4) None of these

25. Which of the following is an incorrect match?

- (1) Enter Key 
- (2) Back space 
- (3) Number Key 
- (4) None of these



END OF THE EXAM

ROUGH PAGE