



# EDUHEAL FOUNDATION



## INTERACTIVE OLYMPIADS

EDUHEAL FOUNDATION CONDUCTS 6 OLYMPIADS ANNUALLY REACHING OUT TO 3,500 + SCHOOLS  
• 4 LAKH + STUDENTS • 50,000 COORDINATING TEACHERS AND HAVING 500 RESOURCE PERSONS  
IN ENGLISH / MATHS / SCIENCE / BIOTECH / COMPUTER / G.K. & 300 REGIONAL COORDINATORS.

WEBSITE : [WWW.EDUHEALFOUNDATION.ORG](http://WWW.EDUHEALFOUNDATION.ORG) • E-MAIL : [EDUHEALFOUNDATION@GMAIL.COM](mailto:EDUHEALFOUNDATION@GMAIL.COM)

<b>ICO</b> INTERNATIONAL CYBER OLYMPIAD	<b>NISO</b> NATIONAL INTERACTIVE SCIENCE OLYMPIAD	<b>NIMO</b> NATIONAL INTERACTIVE MATHS OLYMPIAD	<b>NBTO</b> NATIONAL BIOTECHNOLOGY OLYMPIAD	<b>IEO</b> INTERNATIONAL ENGLISH OLYMPIAD	<b>IGO</b> INTERNATIONAL G.K. OLYMPIAD
---	---	---	--	---	--

**INTERNATIONAL  
CYBER  
OLYMPIAD**

**ICO**

**5**  
Class

**A1**  
Paper  
Code

Academic Partner [WWW.EDUSYS.IN](http://WWW.EDUSYS.IN)

**EtG**  
BOOKS

Creating  
**SUCCESS**  
Stories

A Unit of EDUSYS LEARNING MEDIA


AIEEE • IIT • PMT • OLYMPIADS

### IMPORTANT INFORMATION

- You are allowed additional 10 minutes to fill the required details in the **RESPONSE SHEET**.
- The question paper is made as per syllabus guidelines & pattern given in the information Booklet. The Question Paper for Classes 1 to 6 contains 25 Questions each to be answered in 40 minutes. The Question paper for classes 7 to 12 contains 50 Questions each to be answered in 60 minutes. All questions are compulsory. Further instructions are given in the instruction letter to the coordinator teacher.
- Use the response sheet to mark your responses by darkening the required circle. The response sheet has to be returned to the foundation, duly filled in. The student can retain the Question Paper.

### MENTAL ABILITY

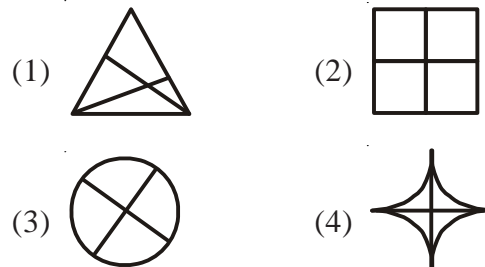
- A watch placed on the table reads 4.30. If the minute hand points east, in what direction will the hour hand point?  
(1) South-East                      (2) North-East  
(3) North                              (4) None of these
- Complete the missing portion of the given pattern by selecting the suitable choice from the given alternatives marked as (1), (2), (3) and (4).




(x)

- |     |     |
|-----|-----|
| (1) | (2) |
| (3) | (4) |

- Identify the figure which is not similar to the other four figures.




- Which number is needed to complete the wheel?



- |       |                   |
|-------|-------------------|
| (1) 7 | (2) 6             |
| (3) 5 | (4) None of these |
- Complete the given series.  
39, 41, 43, 45, 47, \_\_\_\_\_  
(1) 48                                      (2) 50  
(3) 49                                      (4) None of these

## COMPUTERS

6. The primary memory of a computer is present inside the  
 (1) keyboard (2) mouse  
 (3) CPU (4) None of these
7. When we open a new document in MS Word, it will carry the name \_\_\_\_\_ till we rename it while saving it.  
 (1) Document 1 (2) File 1  
 (3) Blank 1 (4) None of these
8. When we point the mouse anywhere over a word and double click, we select \_\_\_\_\_.  
 (1) a sentence (2) a word  
 (3) a paragraph (4) none of these
9. For electronic components, First Generation used  
 (1) Magnetic drum (2) Transistor  
 (3) Vacuum tubes (4) None of the above
10. Computer can understand only \_\_\_\_\_ types of digits.  
 (1) 1 (2) 3  
 (3) 2 (4) None of these
11. Interconnecting networks within an organisation is called  
 (1) Internet (2) E-mail  
 (3) Intranet (4) None of these
12. Click the option \_\_\_\_\_ if you want the spell checker to ignore all occurrences of a misspelling in a document.  
 (1) Delete (2) Ignore  
 (3) Ignore All (4) None of these
13. Which of the following is true :  
 (1) RAM (2) ROM  
 (3) Both (1) & (2) (4) None of these
14. The picture shown is a :

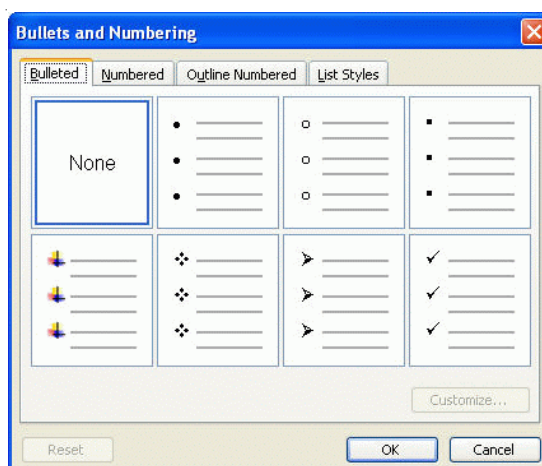


- (1) CD-Rom (2) RAM  
 (3) Hard-disc (4) None of these

15. Which of the following item is NOT an input device?  
 (1) Keyboard (2) Mouse  
 (3) Printer (4) None of these
16. Letters, numbers, and symbols found on a keyboard are \_\_\_\_\_.  
 (1) Icon (2) Keys  
 (3) Screen (4) None of these
17. A CD-ROM can store data approximately-  
 (1) 7 GB (2) 1.44 MB  
 (3) 700 MB (4) None of these
18. Google.com is a \_\_\_\_\_.  
 (1) Educational site (2) Commercial site  
 (3) Organizational site (4) None of these
19. In eduhealfoundation@gmail.com, what does '@' symbol stand for?  
 (1) Rounded (2) At the rate of  
 (3) Hash (4) None of these
20. When you minimise or close all program windows, what you will see?  
 (1) Content of 'My Computer' folder  
 (2) Desktop  
 (3) Formatting and standard toolbars  
 (4) All of these

## EtG INTERACTIVE SECTION

21. We get this window in :



- (1) MS-Word (2) Word-pad  
 (3) Note-Pad (4) None of these

22. How many files are going to get deleted as shown:

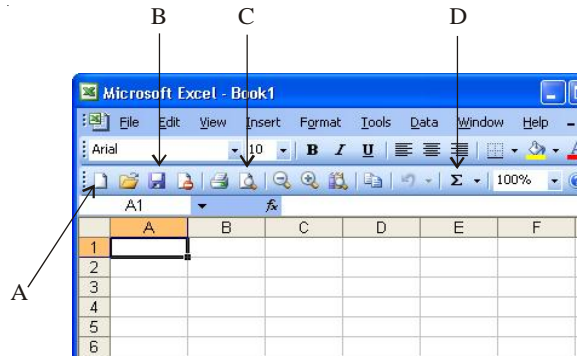


- (1) 4
- (2) 3
- (3) 5
- (4) None of these

23. To open the Print dialog box, press

- (1) File > Print Preview
- (2) Print + Ctrl
- (3) Ctrl + P
- (4) None of these

24. Damini is working in Excel file "Info.xls". The current file is not saved. Now she wants to open a new file. Which icon should she use?



- (1) A
- (2) B
- (3) C
- (4) None of these

25. Which one of the shown device feeds the graphic pictures in the computer:

- (1) 
- (2) 
- (3) 
- (4) 



**END OF THE EXAM**

**ROUGH PAGE**