



EDUHEAL FOUNDATION

INTERACTIVE OLYMPIADS

EDUHEAL FOUNDATION CONDUCTS 8 OLYMPIADS ANNUALLY REACHING OUT TO 3,500 + SCHOOLS
● 4 LAKH + STUDENTS ● 50,000 COORDINATING TEACHERS AND HAVING 500 RESOURCE PERSONS
IN ENGLISH / MATHS / SCIENCE / BIOTECH / COMPUTER / G.K. / ARTS / CRICKET & 300 REGIONAL COORDINATORS.

WEBSITE : WWW.EDUHEALFOUNDATION.ORG ● E-MAIL : EDUHEALFOUNDATION@GMAIL.COM

ICO INTERNATIONAL CYBER OLYMPIAD	NISO NATIONAL INTERACTIVE SCIENCE OLYMPIAD	NIMO NATIONAL INTERACTIVE MATHS OLYMPIAD	NBTO NATIONAL BIOTECHNOLOGY OLYMPIAD	IEO INTERNATIONAL ENGLISH OLYMPIAD	IGO INTERNATIONAL G.K. OLYMPIAD
---	---	---	--	---	--

Level - 1 : Level-1 winners will get certificate, aptitude report, medals for the school toppers and online subscription.

Level - 2 : Top 10 % including school toppers will be selected for level-2-National level - online computer based interactive test held at exam centres all over India. Besides selection for level-3, winner will get merit certificate, aptitude report, medals, Mp3 player, watches, educational CDs, laptop, scholarship, online subscription etc.

Level - 3 : Top 1% will qualify for level 3-International level-where you will compete with students globally. Get selected for EHF's International Olympiad training camp. Only Indian organization giving students exposure to global competitions. Represent India & win laurels. Guidance by top scientists.

Prizes ranges from cash (millions of \$), gadgets, foreign trips, publicity, fame, scholarships, Internships, conference participation and more.

- You are allowed additional 10 minutes to fill the required details in the **RESPONSE SHEET**.
- The question paper is made as per syllabus guidelines & pattern given in the information Booklet. The Question Paper for Classes 1 to 6 contains 25 Questions each to be answered in 40 minutes. The Question paper for classes 7 to 12 contains 50 Questions each to be answered in 60 minutes. All questions are compulsory. Further instructions are given in the instruction letter to the coordinator teacher.
- Use the response sheet to mark your responses by darkening the required circle. The response sheet has to be returned to the foundation, duly filled in. The student can retain the Question Paper.

INTERNATIONAL CYBER OLYMPIAD

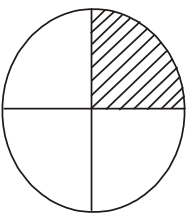
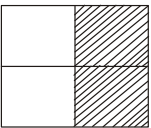
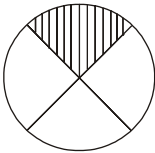
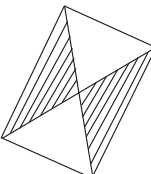
ICO



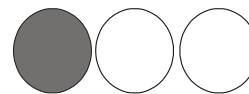
LEVEL - 1



MENTAL ABILITY

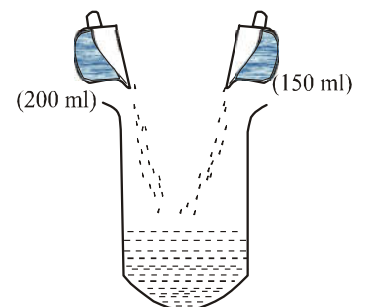
1.  is equivalent to
- (1)  (2) 
- (3)  (4) None of these.

2. The fraction of shaded part is



- (1) $\frac{2}{3}$ (2) $\frac{1}{3}$
- (3) $\frac{3}{2}$ (4) None of these.

3. What is the quantity of water in the big container?



- (1) 300 ml
(2) 400ml
(3) 350 ml
(4) None of these.


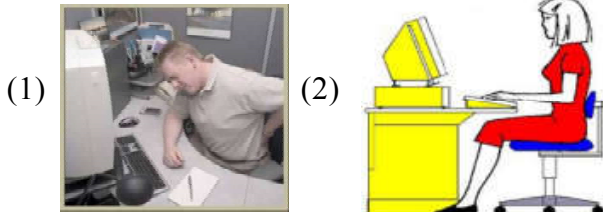
4. The railway tracks never meet because they are
 (1) Parallel (2) Very long
 (3) Perpendicular (4) None of these.
5. Which number is missing in the pattern given below?

57	51	45	39	
----	----	----	----	--

- (1) 33 (2) 35
 (3) 32 (4) None of these.

COMPUTERS

6. Computers can do
 (1) Computers can draw
 (2) Computers can operate machines
 (3) Computers can do calculations
 (4) All of these
7. Which of the following pictures shows the correct position of working on the computer ?



8. Which one of the following is an output device ?



9. CPU is the _____ of computer.



- (1) Eye (2) Brain
 (3) Hand (4) None of these

10.  Scanner is used to _____

- (1) Copy picture and words into a computer
 (2) Delete files or folder
 (3) Copy files or folders
 (4) None of these

11. When the  is off, words that we


- type on the monitor appear in
 (1) Small letters (2) Capital letters
 (3) Hindi Language (4) None of these

12. By looking at this display screen can you tell what has been done with the mouse?




- (1) Left click
- (2) Right click
- (3) Both 1 and 2
- (4) None of these

13. You use _____ to paint in a computer.

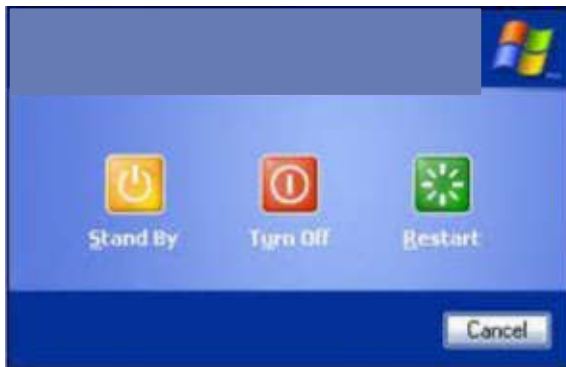


14. Can you name this key ?



- (1) Space bar
- (2) Delete
- (3) Backspace
- (4) None of these

15. This screen comes when you want.



- (1) To open a file

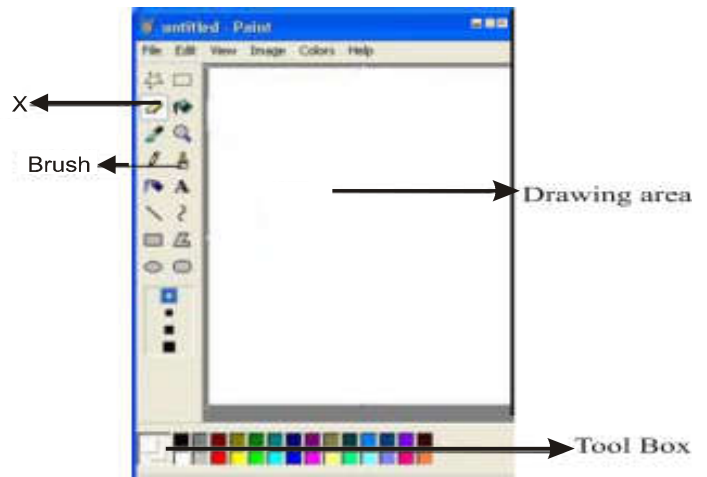
- (2) To turn on your computer
- (3) To turn off your computer
- (4) None of these

16. The screen of a computer shown in the picture is known as _____



- (1) Visualizer
- (2) Led Monitor
- (3) CRT Monitor
- (4) None of these

17. What is 'X' in the diagram ?



- (1) Box
- (2) Eraser
- (3) Colour
- (4) None of these

18. Computer can be of use in _____

- (1) School
- (2) Office
- (3) Bank
- (4) All of the above

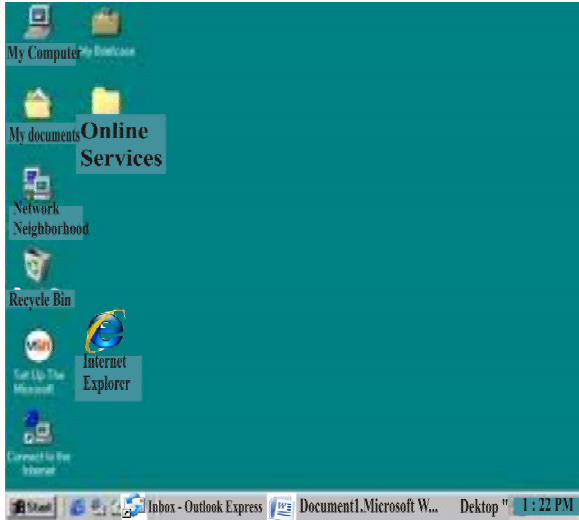
19. Starting the computer is called

- (1) Booting up
- (2) Switching on
- (3) Dialing up
- (4) None of these

20. The first screen that appears on the monitor is called

- (1) Desktop
- (2) Primary screen
- (3) First visual
- (4) None of these

Look at the figure and answer the questions from 21 to 25.



21. 'Online services' in the figure is a _____

- (1) Icon
- (2) Title
- (3) Folder
- (4) None of these

22. 'My Computer' in the figure is an _____

- (1) Icon
- (2) Folder
- (3) Title
- (4) None of these

23. If you want to use internet on the computer then which one of the following should be selected?

- (1) Internet Explorer
- (2) My Computer
- (3) Recycle Bin
- (4) None of these

24. How many programmes are minimized in the figure?

- (1) 3
- (2) 2
- (3) 1
- (4) None of these

25. We can see time on the _____

- (1) Start Button
- (2) Task Bar
- (3) Online services
- (4) None of these



END OF THE EXAM