



EDUHEAL FOUNDATION



INTERACTIVE OLYMPIADS

EDUHEAL FOUNDATION CONDUCTS 8 OLYMPIADS ANNUALLY REACHING OUT TO 3,500 + SCHOOLS
 • 4 LAKH + STUDENTS • 50,000 COORDINATING TEACHERS AND HAVING 500 RESOURCE PERSONS
 IN ENGLISH / MATHS / SCIENCE / BIOTECH / COMPUTER / G.K. / ARTS / CRICKET & 300 REGIONAL COORDINATORS.

WEBSITE : WWW.EDUHEALFOUNDATION.ORG • E-MAIL : EDUHEALFOUNDATION@GMAIL.COM

ICO INTERNATIONAL CYBER OLYMPIAD	NISO NATIONAL INTERACTIVE SCIENCE OLYMPIAD	NIMO NATIONAL INTERACTIVE MATHS OLYMPIAD	NBTO NATIONAL BIOTECHNOLOGY OLYMPIAD	IEO INTERNATIONAL ENGLISH OLYMPIAD	IGO INTERNATIONAL G.K. OLYMPIAD
---	---	---	--	---	--

Level - 1 : Level-1 winners will get certificate, aptitude report, medals for the school toppers and online subscription.

Level - 2 : Top 10 % including school toppers will be selected for level-2-National level - online computer based interactive test held at exam centres all over India. Besides selection for level-3, winner will get merit certificate, aptitude report, medals, Mp3 player, watches, educational CDs, laptop, scholarship, online subscription etc.

Level - 3 : Top 1% will qualify for level 3-International level-where you will compete with students globally. Get selected for EHF's International Olympiad training camp. Only Indian organization giving students exposure to global competitions. Represent India & win laurels. Guidance by top scientists.

Prizes ranges from cash (millions of \$), gadgets, foreign trips, publicity, fame, scholarships, Internships, conference participation and more.

- You are allowed additional 10 minutes to fill the required details in the **RESPONSE SHEET**.
- The question paper is made as per syllabus guidelines & pattern given in the information Booklet. The Question Paper for Classes 1 to 6 contains 25 Questions each to be answered in 40 minutes. The Question paper for classes 7 to 12 contains 50 Questions each to be answered in 60 minutes. All questions are compulsory. Further instructions are given in the instruction letter to the coordinator teacher.
- Use the response sheet to mark your responses by darkening the required circle. The response sheet has to be returned to the foundation, duly filled in. The student can retain the Question Paper.

INTERNATIONAL CYBER OLYMPIAD

ICO

5 Class **A1** Paper Code

LEVEL - 1

Academic Partner — WWW.EDUSYS.IN

EtG BOOKS Creating SUCCESS Stories

A PART OF EDUSYS LEARNING MEDIA
 AISEE • IIT • PNT • OLYMPIADS

intel INTERNATIONAL SCIENCE AND ENGINEERING FAIR

Google Science Fair

THE HARVARD - IIT MATHEMATICS TORNAVENT

ORACLE ThinkQuest EDUCATION FOUNDATION

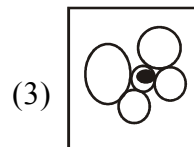
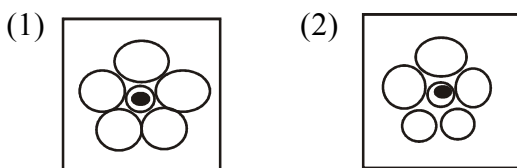
MENTAL ABILITY

- Use the table below to solve this problem. Which is the missing number ?

3	4	7
1	2	3
4	?	10

- (1) 14 (2) 8
 (3) 6 (4) None of these

- Find the odd figure out.



- (4) None of these

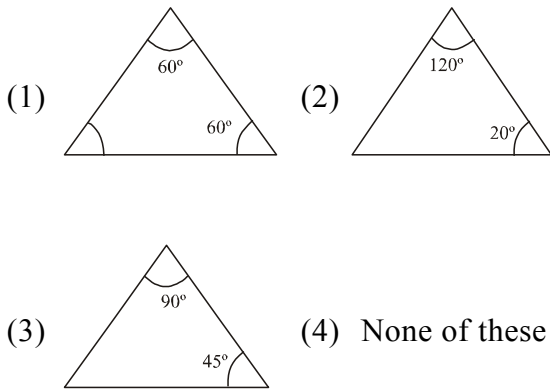
- If means addition, means division

then $3 \text{ } 5 \text{ } 2 \text{ } 5 = ?$

- (1) 2 (2) 3
 (3) 1 (4) None of these
- If 'RAIN' is coded as 3478 and 'My' is coded as 56 then 'AIM' will be

- (1) 478 (2) 475
 (3) 347 (4) None of these

5. Which of the following is an equilateral triangle ?



COMPUTERS

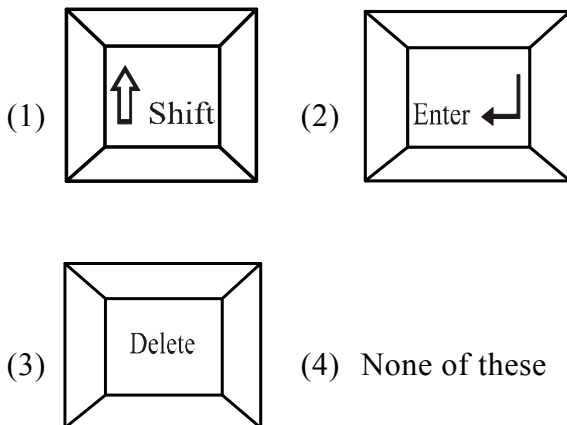
6. The delete command moves the file to _____.

- (1) My computer (2) Recycle Bin
(3) Folder (4) None of these

7. Which of the following is latest version of MS-Word.

- (1) Word 2007 (2) Word 2000
(3) Word XP (4) None of these

8. Which key should the operator press to get the cursor to the next line ?



9. Why we need a CD-Rom drive ?

- (1) To play a CD (2) To play a game
(3) To make paintings (4) None of these

10. Which device is used to copy any picture or text on paper?

- (1) Monitor (2) Scanner
(3) Printer (4) None of these

11. A microphone is used to record _____.

- (1) Files (2) Folders
(3) Sound (4) None of these

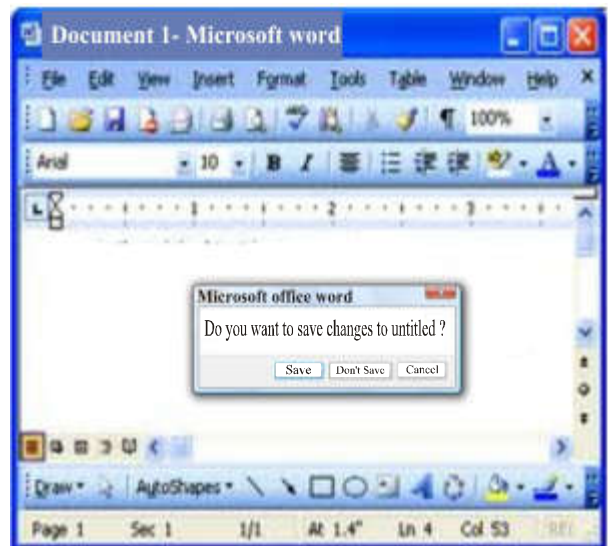
12. Which part of the computer can not be seen or touched.

- (1) Software (2) Hardware
(3) CPU (4) None of these

13. The time during which a machine is switched on but not in use is

- (1) Access time (2) Seek time
(3) Ideal time (4) None of these

14.



When does the above shown window appear?

- (1) When you print the document.
(2) When you close the document.
(3) When you open the document.
(4) None of these.

15. Which one of the following is selected to print the document on paper ?

- (1) Page setup... (2) Save as
(3) Print.... (4) None of these

16 Complete the process.

Start → ? → Microsoft word.

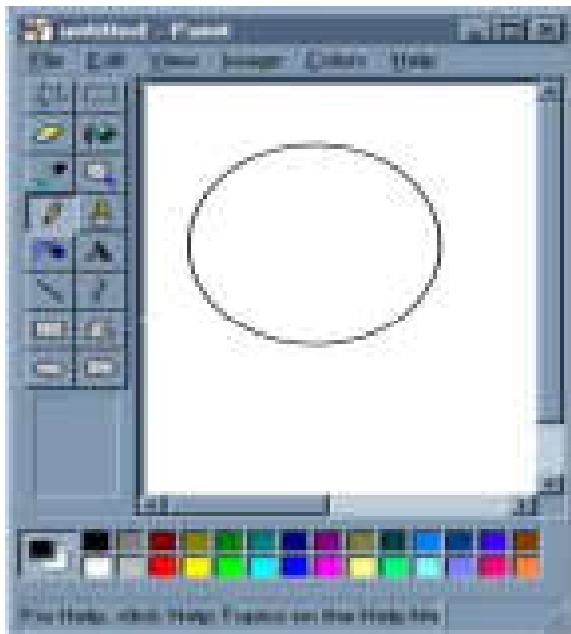
- (1) Documents (2) Programs
(3) Settings (4) None of these




17. Where lies the brain of the computer ?



- (1) A (2) B
 (3) C (4) None of these

18. If you want to fill the circle with blue colour, which icon should be used to get the result?



- (1)  (2) 
 (3)  (4) None of these

19. Which are the alphabet keys ?

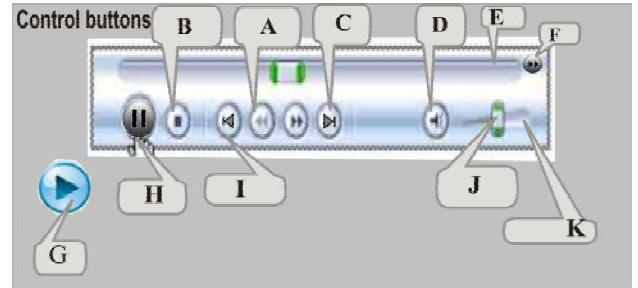
- (1) A, B, C, D (2) 0, 1, 2, 3
 (3) F1, F2, F3, F4 (4) None of these

20. _____ is an input device used for playing computer games.

- (1) Scanner (2) Light Pen
 (3) Micro phone (4) None of these

EtG INTERACTIVE SECTION

Look at the diagram and answer the questions from 21 to 25.



21. To play a song click on the _____ button.
 (1) G (2) H
 (3) I (4) None of these
22. To play the next song, click on the _____ button.
 (1) G (2) I
 (3) C (4) None of these
23. To increase volume, click and drag _____ to the right side.
 (1) D (2) J
 (3) K (4) None of these
24. To speed up the song, press the _____ button.
 (1) F (2) E
 (3) K (4) None of these
25. To pause the playing of a song, click on the _____ button.
 (1) I (2) H
 (3) J (4) None of these



END OF THE EXAM



END OF THE EXAM