

3. You were eating chocolates alone, soon your friends Bunty, Pinky and Rahul joined you too. So now how many people in total ate the chocolates?

- (1) One (2) Two
(3) Three (4) Four

4. ++++ /●/●/●/●++++ _____
what will come in the given blank?

- (1) ++++ (2) /●/●/●
(3) ---- (4) None of these

5. Fill in the blanks

$1 + 3 + \underline{\quad} = 17$

- (1) 10 (2) 13
(3) 16 (4) None of these

COMPUTERS



6. (1) Ramesh is doing the calculation in the computer
(2) Ramesh is painting
(3) Ramesh is playing football
(4) None of these

7. Which one of the following is a true statement?

- (1) Computer is a machine
(2) Computer can do calculations
(3) Clean the computer with dry cloth
(4) All of the above.

8. Which one of the following is a machine?

- (1)  (2) 




9. Computer is a machine.

- (1) It is true (2) It is false
(3) Can't say (4) None of these


10. The instructions which you give to the computer are known as _____.

- (1) Commands (2) Processing
(3) Return (4) None of these

11. What shows you PICTURES?



12. The computer mouse is kept on a



Chair


Pillow



Trap


Pad

13. Where lies the BRAIN of computer?



- (1) A
- (2) B
- (3) C
- (4) D

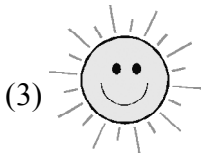
14. Computer can do everything which a _____ can do.



Calculator



Mother



Sun



Microwave oven

15. A computer consists of




(4) All of these

16. Machine helps us by

- (1) Saving our energy
- (2) Saving our time
- (3) Giving us accurate result
- (4) All of these

17. Which is CORRECT?



Displays pictures



Moves the pointer



Remembers the information

(4) All of these

18. Which one of the following can store large amount of data and display information?



(4) None of these

19. Computer gives _____ and fast results.

- (1) Accurate
- (2) Wrong
- (3) Can't say
- (4) None of these

20. Which one is a Central Processing Unit?



21. This is called.



- (1) Mouse
- (2) Mat
- (3) Cat
- (4) Mice

22. What is my name?



- (1) Joystick
- (2) Speaker
- (3) Printer
- (4) None of these

23.



Name the device shown in the picture?

- (1) Tablet
- (2) Mobile
- (3) Computer
- (4) Laptop

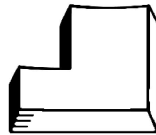
24.



Which part of computer has been shown in the picture?

- (1) Keyboard
- (2) Calculator
- (3) Mouse
- (4) Printer

25.



The key shown in the figure is

- (1) Enter key
- (2) Shift key
- (3) Spacebar key
- (4) None of these



END OF THE EXAM