

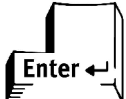


4. Fill in the blanks
 $7 \times 3 = \underline{\quad}$
 (1) 28 (2) 49
 (3) 21 (4) None of these
5. $5 - 3 = 2$
 If 2 is output, then '5-3' is ?
 (1) Input (2) Calculation
 (3) Addition (4) None of these

COMPUTERS



6. What has been shown in the picture?
 (1) Monitor (2) Mirror
 (3) Calculator (4) None of these
7. $3 + 3 = 6$
 So what is 6 ?
 (1) Input (2) Output
 (3) Can't say (4) None of these
8. What can a computer do?
 (1) It can help to paint
 (2) It can help in playing games
 (3) It can help in doing calculations
 (4) All of these
9. There are _____ alphabetic keys in the keyboard.
 (1) 25 (2) 26
 (3) 27 (4) 28
10. Which key is used to change capital letters (DEF) to small letters(def) in a computer?
 (1)  (2) 
 (3)  (4) None of these

11. Thumb is usually used to press .
 (1) Spacebar key (2) Ctrl key
 (3) Shift key (4) None of these



12. Name this device?
 (1) CD (2) DVD
 (3) Floppy (4) None of these
13. The device mentioned in question no. 12 is used for which purpose?
 (1) Storing data (2) Deleting data
 (3) Both 1 and 2 (4) None of these



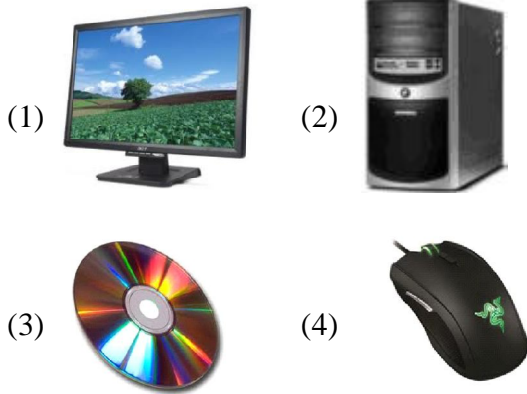
14. This is the longest button of the keyboard
 (1) Spacebar (2) Shift
 (3) Enter (4) Backspace
15. Machines are _____ things which make our work easy.
 (1) Man-made (2) Natural
 (3) Monitor (4) None of these
16. _____ is the food of computer.
 (1) Electricity (2) Data
 (3) Computer bills (4) Waste
17. Computer makes our work _____.
 (1) Easy (2) Hard
 (3) Very hard (4) None of these
18. Laptop is also a computer system.



- (1) True (2) False
 (3) Can't say (4) None of these

19. Computer gives _____ and fast results.
- (1) Accurate (2) Wrong
 (3) Can't say (4) None of these


20. Which one is a Central Processing Unit?



ETG INTERACTIVE SECTION


21. PC stand for:
- (1) Personal Computer
 (2) Public Computer
 (3) Performance Computer
 (4) Pocket Calculator

22. Which of the following icon is used to print a document ?



23. The given picture is a representation of



- (1) Toolbox
 (2) Title bar
 (3) Colour box
 (4) None of these
24. This is a picture of 
- (1) Restore button
 (2) Save as function
 (3) Turtle
 (4) None of these
25. The command used to print the result, when a is subtracted from b, is
- (1) PR b-a
 (2) LABEL a-b
 (3) RT b-a
 (4) LT b-a



END OF THE EXAM