

3. Meena is the grand mother of Manju. Manju is the daughter of Meenal. What is the relationship of Meena to Meenal?

- (1) Mother (2) Mother-in-law
(3) Sister (4) None of these

4. Pinky had 5 chocolates with her. She gave two chocolates to Rohit and Rohit gave her three candies. She gave one candy to Pooja. Now Pinky has

- (1) 2 chocolates and 1 candy
(2) 4 chocolates and 3 candies
(3) 3 chocolates and 2 candies
(4) None of these

5. Fill in the blanks

$$4 + 8 + \underline{\quad ? \quad} = 20$$

- (1) 6 (2) 7
(3) 8 (4) None of these




COMPUTERS



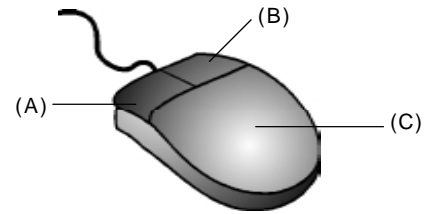
6. What is the boy doing?

- (1) He is doing calculations in the computer.
(2) He is playing game in the computer
(3) He is painting a picture in the computer
(4) None of these

7. We can close and then again start the system through _____ button.

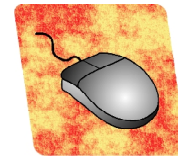
- (1)  (2) 
(3)  (4) None of these

8. Which is right click button?



- (1) A (2) B
(3) C (4) None of these

9. A mouse is kept on




- (1) Paper pad (2) Mouse pad
(3) Table mat (4) None of these

10. Which main part is missing in this figure?






- (1) Mouse (2) Keyboard
(3) CPU (4) None of these

11. We can listen on a computer with the help of _____.






- (1)  (2) 
(3)  (4) None of these

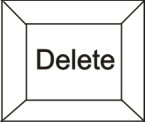
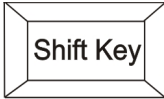

12. All calculation are performed by

- (1)  (2) 
- (3)  (4) None of these

13. Which of the following is a computer system?

- (1)  (2) 
- Calculator Microwave oven
- (3)  (4) None of these
- Laptop

14. The word 'baby' should be typed as 'BABY'.
Which of the following keys should be used for this purpose?

- (1)  (2) 
- (3)  (4) None of these

15. Which of the following is a true statement?

- (1) Computer is used to store large amount of data.
(2) Computer uses electricity
(3) Computer should not be used for bad purposes
(4) All of these

16. What is my name?



- (1) Scanner (2) Joystick
(3) Laser Printer (4) None of these

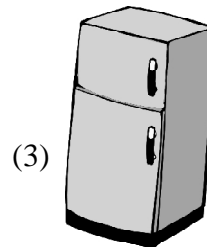

17. What is the full form of CPU?

- (1) Control Processing Unit
(2) Central Processing Unit
(3) Centre Processing unit
(4) None of these

18. Computer makes our work _____.


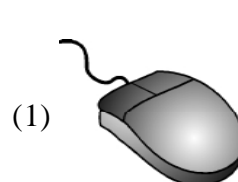
- (1) Difficult (2) Tough
(3) Easy (4) None of these

19. Which of the following is an input device?



- (4) None of these





20. Which mouse runs by electricity ?



- (3) Both (1) and (2) (4) None of these

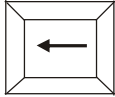
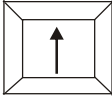
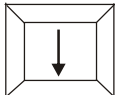
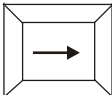
INTERACTIVE SECTION

21. Match the following:-



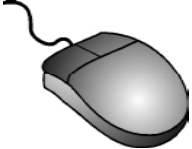
- A.  (i) Used for calculation only
- B.  (ii) Output device
- C.  (iii) Brain of the computer
- D.  (iv) Used for typing

- (1) A-(iv) B-(iii), C-(ii), D-(i)
(2) A-(ii) B-(i), C-(iv), D-(iii)
(3) A-(iii) B-(iv), C-(i), D-(ii)
(4) None of these

22. The cursor can be moved down with?

- (1)  (2) 
- (3)  (4) 

23. Which of the following device can be used to take a print out?

- (1)  (2) 
- (3)  (4) None of these

24.



What kind of these devices are?

- (1) Input devices
(2) Output devices
(3) Both input and output devices
(4) None of these
25. A computer can do only one work at a time.
This statement is
- (1) True
(2) False
(3) Can't say
(4) None of these



END OF THE EXAM