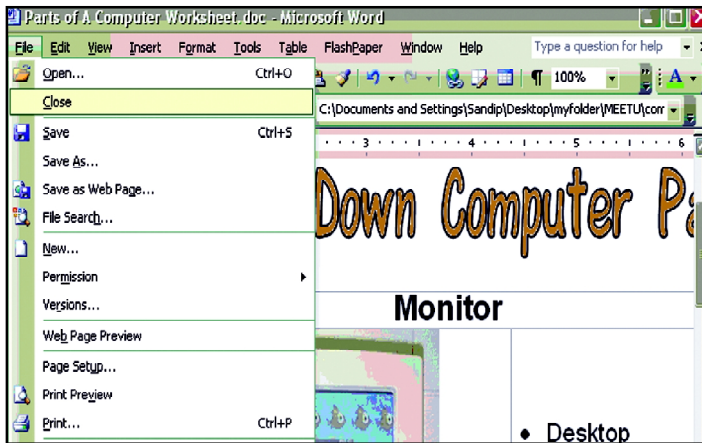


7. Who is the 'Father of Computer' ?

- (1) Napier
- (2) Blaise Pascal
- (3) Herman Hollerith
- (4) Charles Babbage

8. As shown in the window what does Sakshi want to do with the document ?

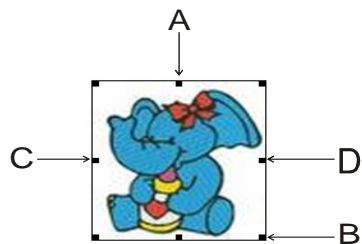


- (1) Save the document
- (2) Print the document
- (3) Close the document
- (4) None of these

9. What is the full form of CD ?

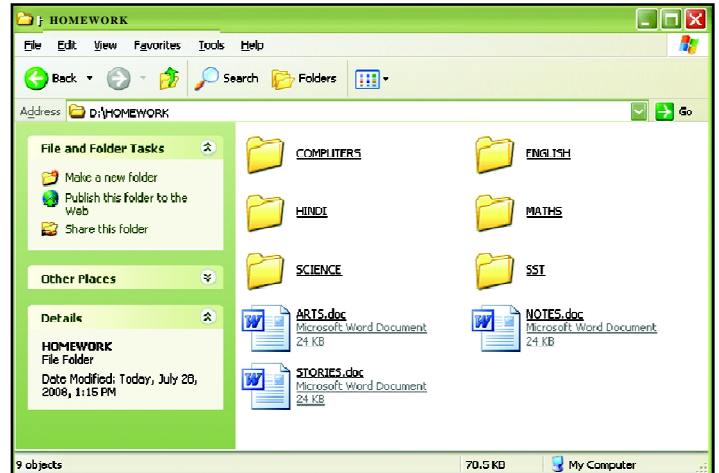
- (1) Compact Disk
- (2) Circular Disk
- (3) Closed Disk
- (4) None of these

10. When Pratyush first inserted the graphic of the cartoon it was too large. He wants to reduce its size. Which arrow is pointing to the handle with which he can reduce the length and breadth in equal proportion?



- (1) Arrow A
- (2) Arrow C
- (3) Arrow B
- (4) Arrow D

Use the given picture to answer Q. nos. 11 and 12.



11. How many folders are there inside the 'Homework' folder ?

- (1) 7
- (2) 5
- (3) 9
- (4) 6

12. 'STORIES' is an MS Word document.

The above statement is

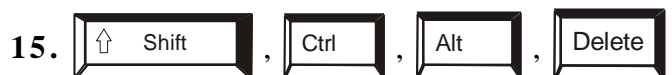
- (1) True
- (2) False
- (3) Can't say
- (4) Data insufficient

13. In Microsoft Excel what name is given to the space where a row and a column meet in a spreadsheet ?

- (1) Cell
- (2) Block
- (3) Row
- (4) Column

14. Which of the following statement is incorrect ?

- (1) Computers can store data.
- (2) Computers cannot do calculations.
- (3) Computers can be used to design a greeting card.
- (4) Computer is a machine



15.

are known as




- (1) Cursor Keys
- (2) Alphabet keys
- (3) Special keys
- (4) Function keys

16. What is 'B' in the given figure ?



- (1) Vertical Scroll Bar
- (2) Horizontal Scroll Bar
- (3) Straight Scroll Bar
- (4) Diagonal Scroll Bar

17. Which of the following icons helps you to minimize the window ?

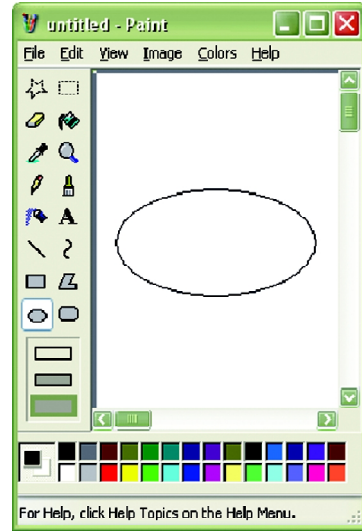
- (1) 
- (2) 
- (3) 

(4) None of these





18. Ctrl + N command in a paint window is to

- (1) Start a new drawing
- (2) Save a drawing
- (3) Erase a drawing
- (4) Open a drawing

19. Sachin made the following picture in the Paint Window of his computer.



Now he wants to fill colour into it. What option would be the best ?

- (1) 
- (2) 
- (3) 
- (4) 



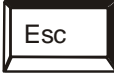
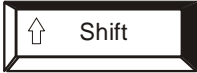
20. What does the user want to do ?



- (1) Start the computer
- (2) Shut down the computer
- (3) Can't say
- (4) Data incomplete

INTERACTIVE SECTION

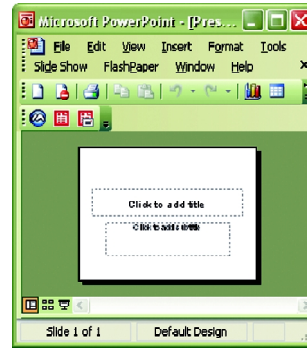
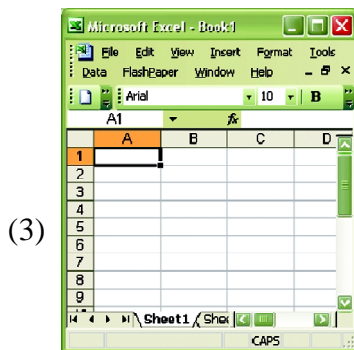
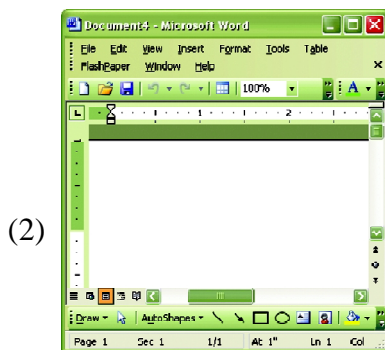
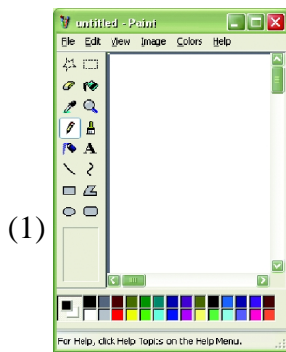
21. To cancel a command which of the following key can be used ?

- (1)  (2) 
 (3)  (4) 

22. Which type of computers are used in forecasting weather ?

- (1) Mini computer (2) Super computer
 (3) Notebook computer (4) None of these


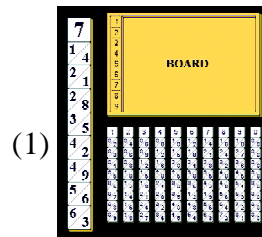
23. Which of the following is a Paint Window ?



24. Which of the following is a correct match ?



- (1) 1950 - 1971 : Ist Generation Computer
 (2) 1956 - 1963 : IInd Generation Computer
 (3) 1970 - 2005 : IIIrd Generation Computer
 (4) Not yet came : IVth Generation Computer

25. Which of the following is the foremost ancestor of present day computers ?



Napier Bone

Analytical Engine



Abacus

Pascaline



END OF THE EXAM