

WEBSITE : WWW.EDUHEALFOUNDATION.ORG • E-MAIL : INFO@EDUHEALFOUNDATION.ORG

ICO INTERNATIONAL CYBER OLYMPIAD	NISO NATIONAL INTERACTIVE SCIENCE OLYMPIAD	NIMO NATIONAL INTERACTIVE MATH OLYMPIAD	NBTO NATIONAL BIOTECHNOLOGY OLYMPIAD	IEO INTERNATIONAL ENGLISH OLYMPIAD	IGO INTERNATIONAL G.K. OLYMPIAD	BIFO BSE INTERNATIONAL FINANCE OLYMPIAD	NIPO NATIONAL IIT-PMT OLYMPIAD
---	---	--	--	---	--	--	---

Level - 1 : All Level-1 successful* participants will get certificate, aptitude report and online subscription, and school toppers will be eligible for school hero medals.

Level - 2 : School toppers* will be selected for level-2-National level - online computer based interactive test held at exam centres all over India. Besides selection for level-3, winner will get merit certificate, medals, educational CDs, laptop, scholarship and other prizes. There is no level 2 in Art, Cricket, Cyber, NIPO and Biotech.

Level - 3 : Toppers will qualify* for level 3-International level-where you will compete with students globally. Get selected for EHF's International Olympiad training camp. Only Indian organization giving students exposure to global competitions. Represent India & win laurels. Guidance by top scientists. Prizes ranges from cash (millions of \$), gadgets, foreign trips, publicity, fame, scholarships, Internships, conference participation and more.

* See prospectus/website for details

1. You are allowed additional 10 minutes to fill the required details in the **RESPONSE SHEET (OMR)**.
2. The question paper is made as per syllabus guidelines & pattern given in the information Booklet. The Question Paper for Classes 1 to 6 contains 25 Questions each to be answered in 40 minutes. The Question paper for classes 7 to 12 contains 50 Questions each to be answered in 60 minutes. All questions are compulsory. Further instructions are given in the instruction letter to the teacher.
3. Use the response sheet to mark your responses by darkening the required circle. The response sheet has to be returned to the foundation, duly filled in. **THE STUDENT CAN RETAIN THE QUESTION PAPER.**

EHF
INTERNATIONAL
CYBER
OLYMPIAD

ICO

1
Class

A1
Paper
Code

LEVEL - 1




MENTAL ABILITY

1. 'Air' is to 'Bird' as 'Water' is to _____ .
(1) Drink (2) Fish
(3) Wash (4) None of these
2. Three of the four are alike in a certain way and so form a group, Which is the one that does not belong to that group?
(1) Green (2) Red
(3) Colour (4) None of these
3. Fill in the missing letter in the following series — S, V, Y, B, ?
(1) C
(2) D
(3) E
(4) None of these


4. Question - figure



Which of the following figures matches with the question figure?

- (1)  (2) 
- (3)  (4) None of these


5. In the given figure, the shaded part is a _____ .




- (1) Square
- (2) Triangle
- (3) Circle
- (4) None of these


COMPUTERS

6. Which machine use electricity to do work?



- (3) 
- (4) None of these


7. Which device can record massive information?






- (3) 
- (4) None of these

8. Which of the following is called brain of the computer?


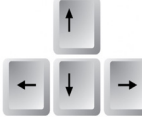



- (3) 
- (4) None of these




9. Which key, if pressed once gives the space of one character?

- (1) 
- (2) 
- (3) 
- (4) None of these

10. A blinking symbol on the screen that shows where the next character will appear is

- (1) 
- (2) 
- (3) 
- (4) None of these

11. Which part of the computer shows all the work that you do in a computer?

- (1) 
- (2) 
- (3) 
- (4) None of these

12. The keyboard has number of keys. The following keys are called —





- (1) Alphabet keys
- (2) Number keys
- (3) Direction keys
- (4) None of these

13. Which is a long key on the keyboard?

- (1) Space bar
- (2) Shift key

- (3) Enter key (4) None of these

14. My job is to click, point and draw. Who am I ?


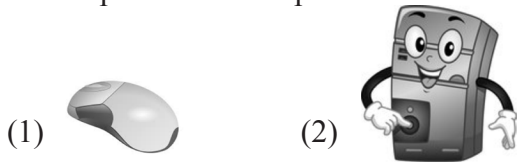


(4) None of these

15. A computer has _____ main parts.

- (1) two (2) four
(3) ten (4) none of these

16. Which part of the computer looks like a T.V.?



17. Which part is missing in the computer system?



(4) None of these

18. Mainly the mouse has _____ buttons.

- (1) one (2) two
(3) many (4) none of these

19. The instructions that you give to a computer are called _____.

- (1) Commands (2) Machine
(3) Processing (4) None of these

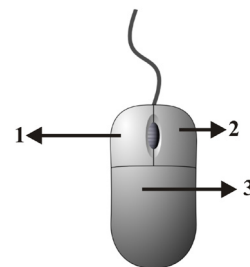
20. The figures on the screen are called _____.



- (1) Window (2) Icons
(3) Power (4) None of these

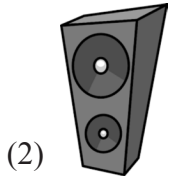
INTERACTIVE SECTION

21. If we want to **right click** on the mouse which button we need to press?




- (1) 2 (2) 3
(3) 1 (4) None of these

22. Rama wants to listen music and sound through computer. Which of the following device she can use?



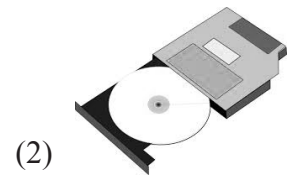

(4) None of these

23. This is the supportive part of computer which keeps the computer working for sometime even after the electricity goes off. What is this?



(4) None of these

24. This device is a light weight and capable of doing everything that a desktop computer can do. This is _____.



(4) None of these

25. This symbol means—



(1) You have to wait

(2) Sorry, you can't click here

(3) Like button

(4) None of these



END OF THE EXAM