



EduHeal Foundation

EDUHEAL FOUNDATION CONDUCTS 8 OLYMPIADS ANNUALLY REACHING OUT TO 3,500 + SCHOOLS

• 5 LAKH + STUDENTS • 50,000 TEACHERS AND HAVING 500 RESOURCE PERSONS
IN ENGLISH / MATHS / SCIENCE / BIOTECH / COMPUTER / G.K. / ARTS / CRICKET / FINANCE & 300 REGIONAL COORDINATORS.

WEBSITE : WWW.EDUHEALFOUNDATION.ORG • E-MAIL : INFO@EDUHEALFOUNDATION.ORG

ICO INTERNATIONAL CYBER OLYMPIAD	NISO NATIONAL INTERACTIVE SCIENCE OLYMPIAD	NIMO NATIONAL INTERACTIVE MATH OLYMPIAD	NBTO NATIONAL BIOTECHNOLOGY OLYMPIAD	IEO INTERNATIONAL ENGLISH OLYMPIAD	IGO INTERNATIONAL G.K. OLYMPIAD	BIFO BSE INTERNATIONAL FINANCE OLYMPIAD	NIPO NATIONAL IIT-PMT OLYMPIAD
---	---	--	--	---	--	--	---

Level - 1 : All Level-1 successful* participants will get certificate, aptitude report and online subscription, and school toppers will be eligible for school hero medals.

Level - 2 : School toppers* will be selected for level-2-National level - online computer based interactive test held at exam centres all over India. Besides selection for level-3, winner will get merit certificate, medals, educational CDs, laptop, scholarship and other prizes. There is no level 2 in Art, Cricket, Cyber, NIPO and Biotech.

Level - 3 : Toppers will qualify# for level 3-International level-where you will compete with students globally. Get selected for EHF's International Olympiad training camp. Only Indian organization giving students exposure to global competitions. Represent India & win laurels. Guidance by top scientists. Prizes ranges from cash (millions of \$), gadgets, foreign trips, publicity, fame, scholarships, Internships, conference participation and more.

* # See prospectus/website for details

1. You are allowed additional 10 minutes to fill the required details in the **RESPONSE SHEET (OMR)**.
2. The question paper is made as per syllabus guidelines & pattern given in the information Booklet. The Question Paper for Classes 1 to 6 contains 25 Questions each to be answered in 40 minutes. The Question paper for classes 7 to 12 contains 50 Questions each to be answered in 60 minutes. All questions are compulsory. Further instructions are given in the instruction letter to the teacher.
3. Use the response sheet to mark your responses by darkening the required circle. The response sheet has to be returned to the foundation, duly filled in. **THE STUDENT CAN RETAIN THE QUESTION PAPER.**

EHF
INTERNATIONAL
CYBER
OLYMPIAD

ICO

2
Class

A1
Paper
Code

LEVEL - 1

MENTAL ABILITY

1. Find the odd man out.

(1) Cut	(2) Put
(3) Nut	(4) None of these
2. 'Medicine' is related to 'Patient' in the same way as 'Education' is related to—

(1) Teacher	(2) School
(3) Student	(4) None of these
3. Mohan is 18th from either end of a row of boys. How many boys are there in that row?

(1) 26
(2) 32
(3) 35
(4) None of these

4. The number opposite side the face having the no. 5 will be —



- | | |
|-------|-------------------|
| (1) 1 | (2) 2 |
| (3) 3 | (4) None of these |
5. Write in a correct sequence —

(a) Rainbow	(b) Rain
(c) Sun	(d) Happiness
(e) Children	

(1) (d), (b), (c), (e), (a)	(2) (d), (e), (a), (b), (c)
(3) (b), (c), (a), (e), (d)	(4) None of these

COMPUTERS

6. This machine can—



- (1) Work very fast (2) Save our time
 (3) Both (1) and (2) (4) None of these

7. Name the following –



- (1) LCD Monitor (2) Desktop Monitor
 (3) Keyboard (4) None of these

8. How many **function keys** are on the keyboard?

- (1) 1 (2) 4
 (3) 12 (4) None of these

9. Which device helps the computer to think and take decisions?



(1)



(2)




(3)

(4) None of these

10. How many alphabet keys are there on a keyboard?

- (1) 4 (2) 12
 (3) 26 (4) none of these

11. This key is used to delete character—



(1)



(2)



(3)


(4) None of these

12. Which key is this?



- (1) Enter
 (2) Escape
 (3) Delete
 (4) None of these

13. Which of the following is **not** correct about a computer?



(1)



(2)



(3)

(4) None of these

14. Find the odd one out.



(1)



(2)



(3)

(4) None of these

15. This is also called



(1) CPU

(2) ALU

(3) VDU

(4) None of these

16. In computer system scanner is _____ device.

(1) Input

(2) Output

(3) Both (1) and (2)

(4) None of these

17. Computers can finish work in _____ time.

(1) more

(2) less

(3) fixed

(4) none of these

18. Find the correct sequence to start a computer.

(1) Press the power button on the C.P.U.

(2) Press the power button on the monitor

(3) Press the switch on the switch board


(1) 1 → 2 → 3

(2) 2 → 3 → 1

(3) 3 → 1 → 2

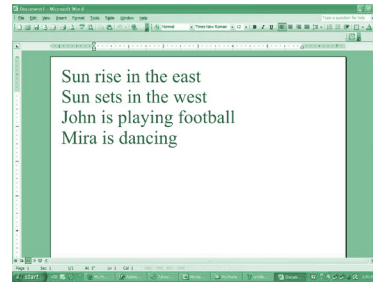
(4) None of these

19. The key which is used to erase characters towards the left is

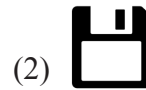



(4) None of these

20. Rohit opened the MS-Word document.



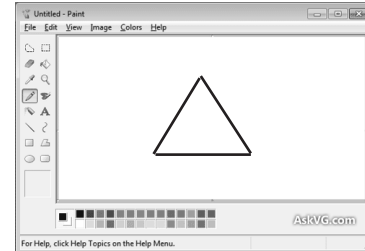
He wants to save the document. Which icon he has chosen?




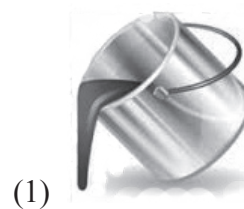
(4) None of these

INTERACTIVE SECTION

21. Nalini is working with paint software. She draws a triangle. She wants to fill it with red colour.

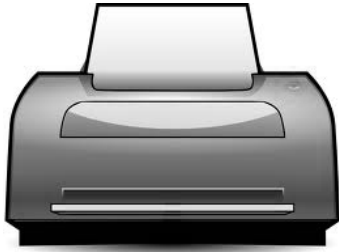


Which icon she should best use to get the desired result?



(4) None of these

22. Which one of the following is a printer?



(1)



(2)



(3)

(4) None of these

23. What does the  mean on a key board?

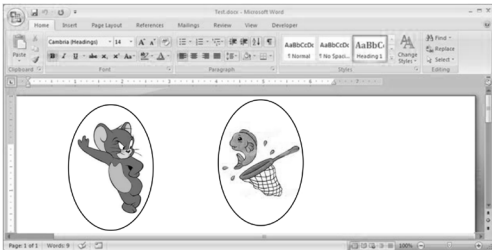
(1) Caps lock

(2) Control


(3) Start

(4) None of these

24. Ronit made a picture gallery using a word processing program.



He wants to change the colour of name of animals.
Which of these icon should he use?



(1)



(2)



(3)

(4) None of these

25. Find the correct sequence.



(1) 1-Esc, 2-Capslock, 3-Space bar, 4-Enter key

(2) 1-Capslock, 2-Space bar, 3-Enter key, 4-Esc

(3) 1-Enter, 2-Capslock, 3-Enter key, 4-Space bar

(4) None of these



END OF THE EXAM