



EduHeal Foundation

EDUHEAL FOUNDATION CONDUCTS 8 OLYMPIADS ANNUALLY REACHING OUT TO 3,500 + SCHOOLS

• 5 LAKH + STUDENTS • 50,000 TEACHERS AND HAVING 500 RESOURCE PERSONS
IN ENGLISH / MATHS / SCIENCE / BIOTECH / COMPUTER / G.K. / ARTS / CRICKET / FINANCE & 300 REGIONAL COORDINATORS.

WEBSITE : WWW.EDUHEALFOUNDATION.ORG • E-MAIL : INFO@EDUHEALFOUNDATION.ORG

ICO INTERNATIONAL CYBER OLYMPIAD	NISO NATIONAL INTERACTIVE SCIENCE OLYMPIAD	NIMO NATIONAL INTERACTIVE MATH OLYMPIAD	NBTO NATIONAL BIOTECHNOLOGY OLYMPIAD	IEO INTERNATIONAL ENGLISH OLYMPIAD	IGO INTERNATIONAL G.K. OLYMPIAD	BIFO BSE INTERNATIONAL FINANCE OLYMPIAD	NIPO NATIONAL IIT-PMT OLYMPIAD
---	---	--	--	---	--	--	---

Level - 1 : All Level-1 successful* participants will get certificate, aptitude report and online subscription, and school toppers will be eligible for school hero medals.

Level - 2 : School toppers* will be selected for level-2-National level - online computer based interactive test held at exam centres all over India. Besides selection for level-3, winner will get merit certificate, medals, educational CDs, laptop, scholarship and other prizes. There is no level 2 in Art, Cricket, Cyber, NIPO and Biotech.

Level - 3 : Toppers will qualify# for level 3-International level-where you will compete with students globally. Get selected for EHF's International Olympiad training camp. Only Indian organization giving students exposure to global competitions. Represent India & win laurels. Guidance by top scientists. Prizes ranges from cash (millions of \$), gadgets, foreign trips, publicity, fame, scholarships, Internships, conference participation and more.

* # See prospectus/website for details

1. You are allowed additional 10 minutes to fill the required details in the **RESPONSE SHEET (OMR)**.
2. The question paper is made as per syllabus guidelines & pattern given in the information Booklet. The Question Paper for Classes 1 to 6 contains 25 Questions each to be answered in 40 minutes. The Question paper for classes 7 to 12 contains 50 Questions each to be answered in 60 minutes. All questions are compulsory. Further instructions are given in the instruction letter to the teacher.
3. Use the response sheet to mark your responses by darkening the required circle. The response sheet has to be returned to the foundation, duly filled in. **THE STUDENT CAN RETAIN THE QUESTION PAPER.**

EHF
INTERNATIONAL
CYBER
OLYMPIAD

ICO




LEVEL - 1

MENTAL ABILITY

1. Find the next letter of the following series
M, T, W, T, F, _____ .
(1) A (2) B
(3) S (4) None of these
2. Select the one which is different from the other three.
(1) January (2) February
(3) July (4) None of these
3. Neena is taller than Pushpa but not as tall as Manish. Rama is taller than Namita but not as tall as Pushpa. Who among them is the tallest?
(1) Manish (2) Pushpa
(3) Namita (4) None of these

4. Paint : Artist : : Wood : ?
(1) Furniture (2) Forest
(3) Carpenter (4) None of these
5. 1, 2, 4, 8, (?), 32. Find the missing number.
(1) 10 (2) 12
(3) 16 (4) None of these

COMPUTERS

6.  is used to _____.
(1) Delete the words
(2) Jump to next line
(3) Convert capital letter to smaller letter & vice-versa
(4) None of these

7. Which is the most important part of a computer?
 (1) Keyboard (2) Memory unit
 (3) CPU (4) None of these
8. Clicking on mouse button once is called:
 (1) Single click (2) Double click
 (3) Drag (4) None of these
9. Computers are used for



- (1) 
 (3) Both (1) and (2)




- (2) 
 (4) None of these

10. Keyboard looks like a



(1) 



(2) 



(3) 

(4) None of these

11. We can improve the security of a computer by the use of
 (1) username (2) password
 (3) account number (4) none of these

12. # This symbol is called

- (1) Hash (2) Ampersand
 (3) Window (4) None of these

13. Which key is used to leave the space in between words?



(1) 



(2) 



(3) 

- (4) None of these

14. How many Numeric keys are on the keyboard?

- (1) 10 (2) 9
 (3) 11 (4) None of these

15. Which input device is usually used to play games in the computer?



(1) 




(2) 



(3) 

(4) None of these

16.  Does this part input or output information for a computer?


- (1) Input only (2) Output only
 (3) Both (1) and (2) (4) None of these

17. The deleted files goes to _____

- (1) Desktop (2) Recycle bin
 (3) My document (4) None of these

18. To switch off the computer, first click on

- (1) Shutdown (2) Start button
 (3) My computer (4) None of these

19.  Marked button in the upper right corner of the window is clicked to _____ .

- (1) Open the window (2) Close the window
 (3) Save the window (4) None of these

20. Which command is used to copy the object in paint brush?

- (1) PASTE (2) COPY
 (3) CUT (4) None of these

INTERACTIVE SECTION

21. Identify the part of the desktop marked [?] given below:

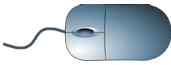


- (1) Internet explorer (2) Start button
 (3) Icons (4) None of these



22. Identify the given device:

- (1) Printer (2) CPU
 (3) Keyboard (4) None of these

23.  Input device that fits under the palm of your hand is _____ .




- (1) mouse (2) keyboard
 (3) desktop (4) none of these

24. Identify the marked key.



- (1) Enter key (2) Arrow key
 (3) Spacebar (4) None of these

25. Which key is used to move the cursor to the next line?

- (1)  (2) 
 (3)  (4) None of these



END OF THE EXAM