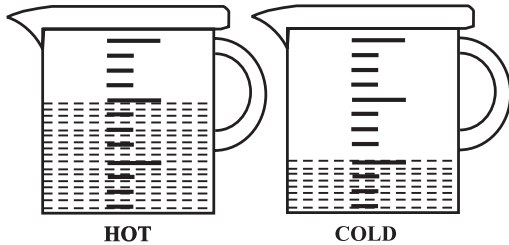


4. What number makes this number sentence true?

$$6 \times 9 < 3 \times \square$$

- (1) 18 (2) 19
(3) 16 (4) None of these

5. Sachin is making gelatin. He adds $\frac{2}{3}$ of a cup of hot water to a bowl. Then he adds $\frac{1}{3}$ of a cup of cold water. How much water does he add all together?



- (1) $\frac{1}{3}$ of a cup of water
(2) $\frac{3}{6}$ of a cup of water
(3) 1 cup of water
(4) None of these

COMPUTERS

6. The latest version of windows is _____ .
(1) Window 7 (2) Window 8
(3) Window 10 (4) None of these
7. In windows, we can run only one program at a time.
(1) True (2) False
(3) Can't say (4) None of these
8. A monitor is the screen on which words, numbers, and graphics can be seen. It is also known as _____ .






- (1) Visual Display Unit (2) Compact Disk
(3) Printer (4) None of these
9. This is a part of the Computer that cannot be seen or touched.

- (1) Software (2) Hardware
(3) Monitor (4) None of these

10. Tool bars are quick to use because:

- (1) The pictures are pretty colours
(2) It's easy to click a button
(3) I said so
(4) None of these

11. Here are some toolbar buttons. Match the correct button with the command.

(a) 	(i) Bold
(b) 	(ii) Cut
(c) 	(iii) Delete
(d) B	(iv) Back

- (1) a-(iii), b-(iv), c-(ii), d-(i)
(2) a-(ii), b-(i), c-(iii), d-(iv)
(3) a-(iv), b-(iii), c-(i), d-(ii)
(4) none of these

12. What does the 'F', mean on the F1, F2, F3, F4 etc. Keyboard keys?

- (1) File (2) Format
(3) Function (4) None of these

13. _____ tool is used to draw a square.

- (1) Pencil (2) Text
(3) Rectangle (4) None of these

14. Which tool is used to draw closed shapes?

- (1) Line (2) Curve
(3) Polygon (4) None of these

15. The example of output device:

- (1) Printer (2) Mouse
(3) CPU (4) None of these

16. A small picture that appears on desktop:

- (1) Icons
- (2) Taskbar
- (3) Start button
- (4) None of these

17. The parts of computer that you can touch and feel are hardware

- (1) True
- (2) False
- (3) Can't say
- (4) None of these



18. Name the item shown in the figure.



- (1) Speaker
- (2) Printer
- (3) Keyboard
- (4) None of these

19. What should not be done while working on computer?



- (1) 
- (2) 
- (3) Both (1) and (2)
- (4) None of these

20. To move the cursor which key would we use.

- (1) Esc
- (2) Enter
- (3) Delete
- (4) None of these

INTERACTIVE SECTION




21. Identify the device



- (1) Joystick
- (2) CPU
- (3) Pendrive
- (4) None of these


22. Which key is used to place the cursor at the end of the line?



- (1) 
- (2) 
- (3) 
- (4) None of these

23. How many function keys are there on the keyboard?

- (1) 10
- (2) 11
- (3) 12
- (4) None of these

24.  Small arrow that appears on the desktop is called _____.

- (1) icons
- (2) mouse pointer
- (3) windows
- (4) none of these

25. Tell the keyboard key which is used to copy the document.

- (1) Ctrl + C
- (2) Ctrl + V
- (3) Ctrl + X
- (4) None of these



END OF THE EXAM