



EHF

LEARNING FOR LIFE

EDUHEAL FOUNDATION

CLASS 2

LEVEL - 1

Set A1

EHF OLYMPIADS

- 4000 schools • 6 lakh students
- 10 olympiads • Global outreach



EHF

INTERNATIONAL CYBER OLYMPIAD

Name :

Roll No :

Class :

School :



**NATIONAL
BIOTECHNOLOGY
OLYMPIAD**



**NATIONAL
MATHS
OLYMPIAD**



**NATIONAL
SCIENCE
OLYMPIAD**




**INTERNATIONAL
CYBER
OLYMPIAD**



**INTERNATIONAL
ENGLISH
OLYMPIAD**



**INTERNATIONAL
GENERAL KNOWLEDGE
OLYMPIAD**



BSE
INVESTORS' PROTECTION FUND

BSE international finance olympiad (BIFO)



NATIONAL IIT-PMT OLYMPIAD (NIPPO)

Level - 1 : All Level-1 successful* participants will get certificate, aptitude report and online subscription, and school toppers will be eligible for school hero medals.

Level - 2 : School toppers* will be selected for level-2-National level - online computer based interactive test held at exam centres all over India. Besides selection for level-3, winner will get merit certificate, medals, educational CDs, laptop, scholarship and other prizes. There is no level-2 in Art and Cricket.

Level - 3 : Toppers will qualify* for level-3-International level-where you will compete with students globally. Get selected for EHF's International Olympiad training camp. Only Indian organization giving students exposure to global competitions. Represent India & win laurels. Guidance by top scientists. Prizes ranges from cash (millions of \$), gadgets, foreign trips, publicity, fame, scholarships, Internships, conference participation and more.

* # See prospectus website for details

Instructions for the Candidate

1. You are allowed additional 10 minutes to fill the required details in the RESPONSE SHEET (OMR).
2. The question paper is made as per syllabus guidelines & pattern given in the information Booklet. The Question Paper for Classes 1 to 6 contains 25 Questions each to be answered in 40 minutes. The Question paper for classes 7 to 12 contains 50 Questions each to be answered in 60 minutes. All questions are compulsory. Further instructions are given in the instruction letter to the teacher.
3. Use the response sheet to mark your responses by darkening the required circle. The response sheet has to be returned to the foundation, duly filled in. THE STUDENT CAN RETAIN THE QUESTION PAPER.

WEBSITE : WWW.EDUHEALFOUNDATION.ORG
E-MAIL : INFO@EDUHEALFOUNDATION.ORG

ROUGH WORK

MENTAL ABILITY

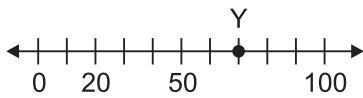
1. Three hundred and one can be written as _____.

- (1) 31 (2) 310
(3) 301 (4) None of these

2. A number comes after 60 which is just before 62. When 5 is added to this number, resultant number will be

- (1) 66 (2) 62
(3) 67 (4) None of these

3. Which number does point Y best represent on the number line?



- (1) 80 (2) 60
(3) 70 (4) None of these

4. Madhu is planning to travel to Ajmer on second Sunday of February. What date will she travel?

- (1) February 13
(2) February 14
(3) February 20
(4) None of these

February						
Sun	Mon	Tue	Wed	Thu	Fri	Sat
		1	2	3	4	5
6	7	8	9	10	11	12
13	14	15	16	17	18	19
20	21	12	13	24	25	26
27	28					

5. What is the total value of the following coins?



- (1) ₹ 9 (2) ₹ 7
(3) ₹ 8 (4) None of these

COMPUTERS

6. What is the food of computer?

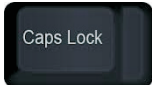
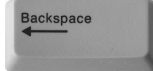
- (1) Petrol (2) Water
(3) Electricity (4) None of these

7. Name the picture.



- (1) Monitor (2) Keyboard
(3) CPU (4) None of these

8. Which key is used to delete the words?

- (1)  (2) 
(3) Both (1) and (2) (4) None of these




9. Which is used to play videogames in a computer?

- (1) Joystick (2) UPS
(3) Speakers (4) None of these


10. Which is not correct about computers?

- (1) Computer is a machine.
(2) Computer cannot do calculations.
(3) CPU is needed by computer system.
(4) None of these

11. Which is a Numeric Keypad?

- (1) 
(2) 
(3) 
(4) None of these

12. Given picture is of 
- (1) Mouse (2) CPU
(3) Cursor (4) None of these




13. Fill in the blanks:
M__N__T__R 
- (1) O, I, O
(2) U, O, A
(3) A, I, K
(4) None of these




14. What do you use to type?
- (1) Mouse (2) Keyboard
(3) CPU (4) None of these

15. Name the computer part starting with alphabet 'M'.
- (1) Mouse (2) Mat
(3) Both (1) and (2) (4) None of these

16. My name is 
- (1) Mouse (2) Track Ball
(3) Joystick (4) None of these

17. Alt key is a
- (1) typing key (2) function key
(3) control key (4) none of these

18. Which is a output device?
- (1)  (2) 
(3)  (4) None of these

19. Brain of the computer is
- (1)  (2) 
(3)  (4) None of these



20. Full form of E-mail-
- (1) Electric-Mail (2) Egg-Mail
(3) Electronic-Mail (4) None of these

INTERACTIVE SECTION

21. A hand-sized computer-
- (1) Laptop Computer (2) Palmtop Computer
(3) Desktop Computer (4) None of these

22. Which is correctly matched?
- | | | |
|----------------|---|------------------|
| (A) Clock | – | Shows Films |
| (B) Radio | – | Plays Music |
| (C) Television | – | Shows Time |
| (D) Car | – | Helps in Talking |
- (1) A (2) B
(3) C (4) None of these

23. The fastest computers-
- (1) Personal computers
(2) Supercomputers
(3) Laptops
(4) None of these

24. Rakhi wants to listen music on computer. She will use
- (1)  (2) 
(3) Both (1) and (2) (4) None of these

25. Menu selected to cut, copy, and paste is
- (1) File
(2) Tools
(3) Edit
(4) None of these



END OF THE EXAM