



EHF

LEARNING FOR LIFE

EDUHEAL FOUNDATION

CLASS 5

LEVEL - 1

Set A1

EHF OLYMPIADS

- 4000 schools • 6 lakh students
- 10 olympiads • Global outreach



EHF

INTERNATIONAL CYBER OLYMPIAD

Name :

Roll No :

Class :

School :



art and cricket clinic contest

NATIONAL BIOTECHNOLOGY OLYMPIAD



NATIONAL MATHS OLYMPIAD



NATIONAL SCIENCE OLYMPIAD



INTERNATIONAL CYBER OLYMPIAD



INTERNATIONAL ENGLISH OLYMPIAD



INTERNATIONAL GENERAL KNOWLEDGE OLYMPIAD



BSE INVESTORS' PROTECTION FUND

BSE international finance olympiad (BIFO)



NATIONAL IIT-PMT OLYMPIAD (NIPO)

Level - 1 : All Level-1 successful* participants will get certificate, aptitude report and online subscription, and school toppers will be eligible for school hero medals.

Level - 2 : School toppers* will be selected for level-2-National level - online computer based interactive test held at exam centres all over India. Besides selection for level-3, winner will get merit certificate, medals, educational CDs, laptop, scholarship and other prizes. There is no level-2 in Art and Cricket.

Level - 3 : Toppers will qualify* for level-3-International level-where you will compete with students globally. Get selected for EHF's International Olympiad training camp. Only Indian organization giving students exposure to global competitions. Represent India & win laurels. Guidance by top scientists. Prizes ranges from cash (millions of \$), gadgets, foreign trips, publicity, fame, scholarships, Internships, conference participation and more.

* See prospectus website for details

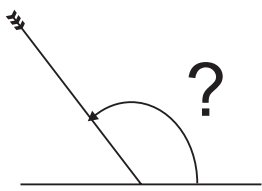
Instructions for the Candidate

1. You are allowed additional 10 minutes to fill the required details in the RESPONSE SHEET (OMR).
2. The question paper is made as per syllabus guidelines & pattern given in the information Booklet. The Question Paper for Classes 1 to 6 contains 25 Questions each to be answered in 40 minutes. The Question paper for classes 7 to 12 contains 50 Questions each to be answered in 60 minutes. All questions are compulsory. Further instructions are given in the instruction letter to the teacher.
3. Use the response sheet to mark your responses by darkening the required circle. The response sheet has to be returned to the foundation, duly filled in. THE STUDENT CAN RETAIN THE QUESTION PAPER.

WEBSITE : WWW.EDUHEALFOUNDATION.ORG
E-MAIL : INFO@EDUHEALFOUNDATION.ORG

ROUGH WORK

MENTAL ABILITY

- There are 40 students in a class, $\frac{3}{4}$ of them attended a picnic. How many students did not attend the picnic?
(1) 10 (2) 20
(3) 30 (4) None of these
 - An arrow makes an angle with the level ground, as shown in the picture. Which best names this angle?
(1) Right
(2) Obtuse
(3) Straight
(4) None of these
- 

COMPUTERS

- The digital computer was developed primarily in
(1) USSR (2) Japan
(3) USA (4) None of these
- Which device allows your computer to talk to other computers over a telephone line as well as access the internet?
(1) Modem (2) RAM
(3) CD-ROM drive (4) None of these
- What is the permanent memory built into your computer called?
(1) ROM (2) RAM
(3) CPU (4) None of these
- An access store from which data can be read and can be written on it, this storage is classified as
(1) read only memory
(2) random access memory
(3) random only memory
(4) none of these
- A program that is employed in the development, repair or enhancement of other programs is known as
(1) System software (2) Software tool
(3) Applications program (4) None of these
- Instruction in computer languages consists of
(1) OPCODE
(2) OPERAND
(3) Both (1) and (2)
(4) None of these
- The rectangular area of the screen that displays a program, data, and/or information is a
(1) button (2) dialog box
(3) window (4) none of these
- Paint programs are used for creating and editing _____.
(1) bitmap images (2) vector images
(3) text (4) none of these
- Which menu in MS-Word can be used to change character size and typeface?
(1) View (2) Tools
(3) Format (4) None of these
- You can jump to the next column by
(1) Press (Alt + Down arrow)
(2) Clicking with your mouse on the next column
(3) Both (1) and (2)
(4) None of these

16. Which mode loads minimal set of drivers when starting Windows?

- (1) Safe Mode (2) Normal Mode
 (3) VGA Mode (4) None of these

17. COBOL is a

- (1) Machine Level Language
 (2) High Level Language
 (3) Assembly Language
 (4) None of these

18. Identify the given picture:

- (1) Printer
 (2) Projector
 (3) Plotter
 (4) None of these



19. Dynamic memory cells store a data bit in a _____.




- (1) diode
 (2) resistor
 (3) capacitor
 (4) none of these

20. Windows 7 Operating System is an upgrade from

- (1) Window Millennium
 (2) Window 98
 (3) Window XP or Vista
 (4) None of these

INTERACTIVE SECTION



21. Which of the following is a primary memory device?



- (1)  (2) 
 (3)  (4) None of these

22. A user wishes to remove a spreadsheet from a workbook. Which is the correct sequence of events that will do this?

- (1) Go to File-Save As – Save As Type – Excel worksheet.
 (2) Right click on the spreadsheet tab and select Delete.
 (3) Right click on the spreadsheet and select Insert – Entire Column.
 (4) None of these

23. Which of the following is correctly matched?

A. Optical Disk	
B. Memory Cards	

C. Modem	
D. External Hard Disk	

- (1) A and B (2) B and C
 (3) C and D (4) None of these

24. Identify this icon.

- (1) Left alignment
 (2) Right alignment
 (3) Center alignment
 (4) None of these



25. The circuitry that includes the CPU and memory chips is located on the

- (1) operating system (2) motherboard
 (3) computer platform (4) none of these



END OF THE EXAM