

# MENTAL ABILITY

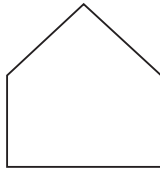
1. Pick the odd one out.

- (1) Book                                      (2) Index  
 (3) Glossary                                (4) Chapter

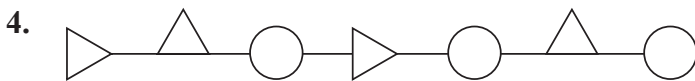
2. In a family there is one mother, father, sister, brother and a grandmother. How many members are there in the family?

- (1) Four  
 (2) Six  
 (3) Five  
 (4) Seven

3. How many corners are there in the following figure?



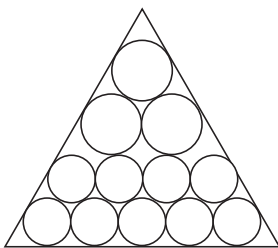
- (1) Five  
 (2) Six  
 (3) Four  
 (4) None of these



The figure shown above contains:

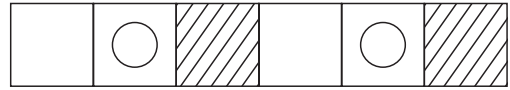
- (1) triangles only  
 (2) circles only  
 (3) rectangles, circles and triangles  
 (4) triangles and circles

5. How many balls does the following pyramid contains?



- (1) 13                                      (2) 12  
 (3) 15                                      (4) 14

6. Which is the next figure in the given pattern?



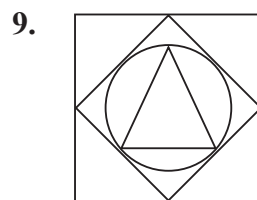
- (1)                                      (2)   
 (3)                                      (4)

7. If A is the son of your father's wife then what is the relation of A with you?

- (1) Son  
 (2) Daughter  
 (3) Brother  
 (4) Sister

8. On 8<sup>th</sup> Feb, 2005 it was tuesday. What was the day of the week on 8<sup>th</sup> Feb, 2004?

- (1) Tuesday                                      (2) Sunday  
 (3) Wednesday                                      (4) Saturday



Which shapes are inclosed in above figure?

- (1) Square  
 (2) Circle  
 (3) Triangle  
 (4) All of these

10. Which shape comes next in the pattern?



- (1)                                      (2)   
 (3)                                      (4)

# COMPUTERS





11. What work computer cannot do?

- (1) Play games
- (2) Watching movie
- (3) Horse riding
- (4) Homework



12. What do you mean by windows?

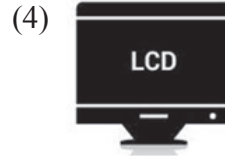

- (1) Computer software
- (2) Wood window
- (3) School window
- (4) Camera

13. Which is not the internal part of CPU?

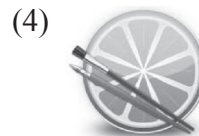
- (1) 
- (2) 
- (3) 
- (4) 

14. Which one is not an input device?

- (1) 
- (2) 



15. Which of the following is used for painting in computer?



16. Recognize device name







- (1) Router
- (2) Monitor
- (3) UPS
- (4) CPU

17. Which is a OUTPUT device among the following?




- (1) D
- (2) C
- (3) F
- (4) B

18. I am brain of computer. Who am I?





- (1) 
- (2) 
- (3) 
- (4) 

19. Find out who am I?



- (1) INK-pen
- (2) ELECTRIC - Pen
- (3) DIGITAL - Pen
- (4) None of these

20. I help you in writing but I am not a pen who am I?





- (1) 
- (2) 
- (3) 
- (4) 

21. Find out ODD one.







- (1) Graphic tablet
- (2) Gamepad
- (3) Keyboard
- (4) Speakers





22. The device which is used for printing.

- (1) 
- (2) 
- (3) 
- (4) 





23. Temporary storage of data is done in

- (1) 
- (2) 
- (3) 
- (4) 

24. I am not a storage device. Tell my name.





- (1) 
- (2) 
- (3) 
- (4) 

25. Device used for video recording

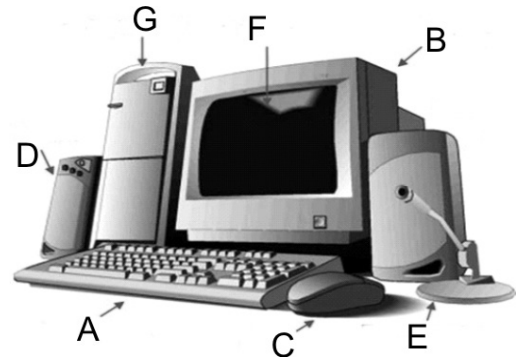
- (1) 
- (2) 
- (3) 
- (4) 

## INTERACTIVE SECTION

26. Which one is correct match?

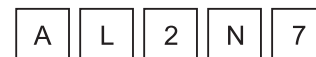
- (1)  Mouse
- (2)  Wi-Fi
- (3)  Printer
- (4)  Hard disk

27. What is F?



- (1) Monitor
- (2) Screen
- (3) CPU
- (4) Speaker

28. Alphabets + Numeric is called \_\_\_\_\_



- (1) Alpha numeral
- (2) Alpha numerical
- (3) Alphanumeric
- (4) Alpha number


29. Guess which key am I.

NAME: 

A	L	P	N	A
---	---	---	---	---

- (1) Alphanumeric
- (2) Alphabet
- (3) Keyword
- (4) Alpha numeral

30. Look at the picture and write the name: \_\_\_\_\_



- (1) CPU
- (2) Hard disk
- (3) RAM
- (4) Speaker

31. The instructions which you give to the computer are known as \_\_\_\_\_.

- (1) Commands
- (2) Processing
- (3) Return
- (4) Order

32. How is computer differ from you?

- (1) I and computer always remember things.
- (2) Only computer forget things.
- (3) I can forget things but computer cannot forget things.
- (4) Computer can forget things but I cannot forget things.

33. What computer can do?

- (1) Computer can cook food.
- (2) Computer can wash clothes.
- (3) Computer can walk everywhere.
- (4) Computer can do booking of tickets on railway station.

34. Computer gives \_\_\_\_\_ and fast result.

- (1) good
- (2) best
- (3) beautiful
- (4) accurate

35. This icon \_\_\_\_\_ is used for \_\_\_\_\_







- (1) close
- (2) minimize
- (3) maximize
- (4) shutdown

36. This is used by:



- (1) Mouse
- (2) Printer
- (3) Wi-Fi
- (4) Keyboard

37. Which device we use for internet?

- (1) 
- (2) 
- (3) 
- (4) 

38. Say whether the following statements are true or false:

- A. A computer is a useless machine.
- B. Computers are not used in airports.

- (1) Both A and B are true
- (2) Both A and B are false
- (3) A is true and B is false
- (4) B is true and A is false

39. Mention the names of the following devices.

1.



2.



3.



4.



- (1) 1-Router, 2-CD, 3-Printer, 4-Hard disk
- (2) 1-Router, 2-Hard disk, 3-Printer, 4-CD
- (3) 1-Router, 2-Printer, 3-CD, 4-Hardisk
- (4) 1-Router, 2-Hard disk, 3-CD, 4-Printer

40. What is my name?



- (1) Speaker
- (2) Joystick
- (3) Printer
- (4) Scanner



**END OF THE EXAM**