



EDUHEAL FOUNDATION



INTERACTIVE OLYMPIADS

EDUHEAL FOUNDATION CONDUCTS 6 OLYMPIADS ANNUALLY REACHING OUT TO 3,500 + SCHOOLS
• 4 LAKH + STUDENTS • 50,000 COORDINATING TEACHERS AND HAVING 500 RESOURCE PERSONS
IN ENGLISH / MATHS / SCIENCE / BIOTECH / COMPUTER / G.K. & 300 REGIONAL COORDINATORS.

WEBSITE : WWW.EDUHEALFOUNDATION.ORG • E-MAIL : EDUHEALFOUNDATION@GMAIL.COM

IGO INTERNATIONAL CYBER OLYMPIAD	NISO NATIONAL INTERACTIVE SCIENCE OLYMPIAD	NIMO NATIONAL INTERACTIVE MATHS OLYMPIAD	NBTO NATIONAL BIOTECHNOLOGY OLYMPIAD	IEO INTERNATIONAL ENGLISH OLYMPIAD	IGO INTERNATIONAL G.K. OLYMPIAD
---	---	---	--	---	--

**INTERNATIONAL
G. K.
OLYMPIAD**

IGO

2
Class

A1
Paper
Code

Academic Partner ——— WWW.EDUSYS.IN

Creating **SUCCESS** Stories

A Unit of EDUSYS LEARNING MEDIA

AIEEE • IIT • PMT • OLYMPIADS

IMPORTANT INFORMATION

- You are allowed additional 10 minutes to fill the required details in the **RESPONSE SHEET**.
- The question paper is made as per syllabus guidelines & pattern given in the information Booklet. The Question Paper for Classes 1 to 6 contains 25 Questions each to be answered in 40 minutes. The Question paper for classes 7 to 12 contains 50 Questions each to be answered in 60 minutes. All questions are compulsory. Further instructions are given in the instruction letter to the coordinator teacher.
- Use the response sheet to mark your responses by darkening the required circle. The response sheet has to be returned to the foundation, duly filled in. The student can retain the Question Paper.


GENERAL KNOWLEDGE

1. This animal loves eating _____.



- (1) Banana (2) Milk
(3) Grass (4) None of these

2. This animal lives in/on



- (1) Water (2) Land
(3) Both (1) and (2) (4) None of these

3. The vegetable that you can eat in salad is _____



- (1) Potato (2) Pear
(3) Cucumber (4) None of these

4. The correct name of this flower is _____.



- (1) Marigold (2) Sunflower
(3) Rose (4) None of these

5. Fast moving air is called




- (1) Cyclone
- (2) Tsunami
- (3) Wind
- (4) None of these

6. What is she doing?




- (1) Planting
- (2) Painting
- (3) Playing
- (4) None of these

7. This is a picture of a _____.



- (1) King
- (2) Knight
- (3) Magician
- (4) None of these

8. Who I am?



- (1) Lady finger
- (2) Star fish
- (3) Foot ball
- (4) None of these

9. Name the places of worship



- (1) Temple
- (2) Church
- (3) Mosque
- (4) None of these

10. Name the means of transport



- (1) Aeroplane
- (2) Train
- (3) Ship
- (4) None of these

11. We see this in a park.



- (1) Swing
- (2) Bench
- (3) Slide
- (4) None of these

12. A things to wear



- (1) Coat
- (2) T-shirt
- (3) Jacket
- (4) None of these

13. Which of these animals hibernate?



- (1) Deer
- (2) Bear
- (3) Squirrel
- (4) None of these

14. This is one of our **internal** body part



- (1) Scalp
- (2) Skull
- (3) Brain
- (4) None of these

15. Name the city where this structure can be seen.



- (1) Delhi
- (2) Mumbai
- (3) Kolkata
- (4) None of these

16. Name the sport shown below.



- (1) Wrestling
- (2) Shooting
- (3) Equestrian
- (4) None of these

17. The name of this medical instrument is _____?



- (1) Syringe
- (2) Thermometer
- (3) Bandage
- (4) None of these

18. We can see it in an office



- (1) Calculator
- (2) Floppy
- (3) Fax machine
- (4) None of these

19. Which day we remember the death of Jesus?



- (1) Good Friday
- (2) Ramzan
- (3) Children's day
- (4) None of these

20. What is the sound of cat?



- (1) Caw, Caw
- (2) Meow, Meow
- (3) Roar
- (4) None of these

