



EDUHEAL FOUNDATION



INTERACTIVE OLYMPIADS

EDUHEAL FOUNDATION CONDUCTS 6 OLYMPIADS ANNUALLY REACHING OUT TO 3,500 + SCHOOLS
• 4 LAKH + STUDENTS • 50,000 COORDINATING TEACHERS AND HAVING 500 RESOURCE PERSONS
IN ENGLISH / MATHS / SCIENCE / BIOTECH / COMPUTER / G.K. & 300 REGIONAL COORDINATORS.

WEBSITE : WWW.EDUHEALFOUNDATION.ORG • E-MAIL : EDUHEALFOUNDATION@GMAIL.COM

IGO INTERNATIONAL CYBER OLYMPIAD	NISO NATIONAL INTERACTIVE SCIENCE OLYMPIAD	NIMO NATIONAL INTERACTIVE MATHS OLYMPIAD	NBTO NATIONAL BIOTECHNOLOGY OLYMPIAD	IEO INTERNATIONAL ENGLISH OLYMPIAD	IGO INTERNATIONAL G.K. OLYMPIAD
---	---	---	--	---	--

**INTERNATIONAL
G. K.
OLYMPIAD**

IGO

3
Class

A1
Paper
Code

Academic Partner ——— WWW.EDUSYS.IN

Creating
SUCCESS
Stories

A Unit of EDUSYS LEARNING MEDIA

AIEEE • IIT • PMT • OLYMPIADS

IMPORTANT INFORMATION

- You are allowed additional 10 minutes to fill the required details in the **RESPONSE SHEET**.
- The question paper is made as per syllabus guidelines & pattern given in the information Booklet. The Question Paper for Classes 1 to 6 contains 25 Questions each to be answered in 40 minutes. The Question paper for classes 7 to 12 contains 50 Questions each to be answered in 60 minutes. All questions are compulsory. Further instructions are given in the instruction letter to the coordinator teacher.
- Use the response sheet to mark your responses by darkening the required circle. The response sheet has to be returned to the foundation, duly filled in. The student can retain the Question Paper.

GENERAL KNOWLEDGE

1. What this picture shows




- | | |
|--------------|-------------------|
| (1) Monument | (2) Chimney |
| (3) Pillar | (4) None of these |
- In which book would you find the location of a town on a map?

(1) A novel	(2) A register
(3) An atlas	(4) None of these
- The man shown in the picture is?




- | | |
|-------------|-----------|
| (1) Painter | (2) Chef |
| (3) Doctor | (4) Pilot |
- Which animal live in jungle.



(1)



(2)



(3)

(4) All of these

5. Place where a farmer grows crops.



- | | |
|------------|-------------------|
| (1) Garden | (2) Nursery |
| (3) Field | (4) None of these |

6. This is the picture of the largest animal in sea.



- (1) Star fish (2) Whale
(3) Katla fish (4) None of these

7. The man with the cup is _____.



- (1) Azharuddin (2) Sunil Gavaskar
(3) Kapil Dev (4) None of these

8. He has played an important role in Indian history.



- (1) Gandhiji (2) Motilal Nehru
(3) Jawaharlal Nehru (4) None of these

9. He is a famous actor. Who is he?



- (1) Javed Akhtar (2) Dilip Kumar
(3) Amjad Ali Khan (4) None of these

10. What are body building foods called?

- (1) Fats (2) Proteins
(3) Carbohydrates (4) None of these

11. Which vitamin is good for the skin?

- (1) Vitamin A (2) Vitamin E
(3) Vitamin D (4) None of these

12. Marie Curie discovered radium. She was born in _____.



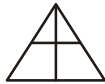


- (1) France (2) Poland
(3) America (4) None of these

13. Insert the missing number?

2 5 9 14 20

- (1) 26 (2) 11
(3) 27 (4) None of these

14. The odd figure is

- (1)  (2) 
(3)  (4) None of these

15. Identify the picture.



- (1) Screw driver (2) Sharpener
(3) Wheel Chair (4) None of these

16. Kangaroo is found in



- (1) India (2) China
(3) Australia (4) None of these

17. The picture is of a musical instrument.



- (1) Violin (2) Guitar
(3) Tabla (4) None of these

18. The page tells you what the book contains and on which page you find it

- (1) Index (2) Preface
(3) Content page (4) None of these

19. The monument shown below is _____.



- (1) Eiffel Tower (2) Great wall of China
(3) Taj Mahal (4) None of these

20. "Jadoo" an alien was seen in which movie?



- (1) Avatar (2) Koi Mil Gaya
(3) KingKong (4) None of these

ETG INTERACTIVE SECTION

Choose from the box which one of the following is a correct answer.

1. Computer	2. Fax machine
3. Document holder	4. Tape-dispenser
5. Planner	6. Compact Disc

21. _____



- (1) 1 (2) 2
(3) 4 (4) 3

22. _____



- (1) 6 (2) 3
(3) 5 (4) 4

23. _____



- (1) 2 (2) 1
(3) 4 (4) 3

24. _____



- (1) 3 (2) 1
(3) 2 (4) 4

25. _____



- (1) 4 (2) 3
(3) 2 (4) 1



END OF THE EXAM

Rough Page