



EDUHEAL FOUNDATION

INTERACTIVE OLYMPIADS

EDUHEAL FOUNDATION CONDUCTS 8 OLYMPIADS ANNUALLY REACHING OUT TO 3,500 + SCHOOLS
• 4 LAKH + STUDENTS • 50,000 COORDINATING TEACHERS AND HAVING 500 RESOURCE PERSONS
IN ENGLISH / MATHS / SCIENCE / BIOTECH / COMPUTER / G.K. / ARTS / CRICKET & 300 REGIONAL COORDINATORS.

WEBSITE : WWW.EDUHEALFOUNDATION.ORG • E-MAIL : EDUHEALFOUNDATION@GMAIL.COM

ICO INTERNATIONAL CYBER OLYMPIAD	NISO NATIONAL INTERACTIVE SCIENCE OLYMPIAD	NIMO NATIONAL INTERACTIVE MATHS OLYMPIAD	NBTO NATIONAL BIOTECHNOLOGY OLYMPIAD	IEO INTERNATIONAL ENGLISH OLYMPIAD	IGO INTERNATIONAL G.K. OLYMPIAD
-----------------------------------------------	---------------------------------------------------------	-------------------------------------------------------	------------------------------------------------------	-------------------------------------------------	----------------------------------------------

Level - 1 : Level-1 winners will get certificate, aptitude report, medals for the school toppers and online subscription.

Level - 2 : Top 10 % including school toppers will be selected for level-2-National level - online computer based interactive test held at exam centres all over India. Besides selection for level-3, winner will get merit certificate, aptitude report, medals, Mp3 player, watches, educational CDs, laptop, scholarship, online subscription etc.

Level - 3 : Top 1% will qualify for level 3-International level-where you will compete with students globally. Get selected for EHF's International Olympiad training camp. Only Indian organization giving students exposure to global competitions. Represent India & win laurels. Guidance by top scientists.

Prizes ranges from cash (millions of \$), gadgets, foreign trips, publicity, fame, scholarships, Internships, conference participation and more.

Level 3 is in Maths, Science & Cyber only.

1. You are allowed additional 10 minutes to fill the required details in the **RESPONSE SHEET**.
2. The question paper is made as per syllabus guidelines & pattern given in the information Booklet. The Question Paper for Classes 1 to 6 contains 25 Questions each to be answered in 40 minutes. The Question paper for classes 7 to 12 contains 50 Questions each to be answered in 60 minutes. All questions are compulsory. Further instructions are given in the instruction letter to the coordinator teacher.
3. Use the response sheet to mark your responses by darkening the required circle. The response sheet has to be returned to the foundation, duly filled in. The student can retain the Question Paper.

**INTERNATIONAL
G. K.
OLYMPIAD**

IGO

**3
Class**


**A1
Paper
Code**

LEVEL - 1



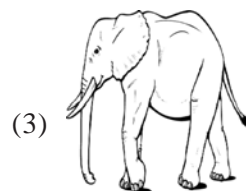

GENERAL KNOWLEDGE

1. Which animal lives in a stable?



(4) None of these

2. Sound made by which animal is called 'trumpet'?



(4) None of these

3. The given picture shows which season?





(1) Summer

(2) Winter

(3) Autumn

(4) None of these

4. A bird which sleeps during the day



(4) None of these

5. This is the picture of a well known sport.



- (1) Skating (2) Cycling
(3) Shooting (4) None of these

6. Who is this famous personality?



- (1) Sarojini Naidu (2) Mother Teresa
(3) Kiran Bedi (4) None of these

7. The man shown in the picture is?



- (1) Farmer (2) Painter
(3) Plumber (4) None of these

8. If the arms of the given animal is cut off, new arms will grow.





- (1) Octopus (2) Starfish
(3) Gold fish (4) None of these

9. One who sells flowers



- (1) Philatelist (2) Artist
(3) Florist (4) None of these

10. Identify the food among the following which is eaten without peeling



(4) None of these

11. Shree Krishna was born in



- (1) Mathura (2) Lumbini

- (3) Mecca (4) None of these

12. He is a famous actor. Who is he?



- (1) Dilip Kumar (2) Amitabh Bachchan
(3) Aamir Khan (4) None of these

13. Insert the missing number

2, 4, 8, 16,

- (1) 32 (2) 34
(3) 36 (4) None of these

14. This animal hides its nuts all over the place.



- (1) Rabbit (2) Beaver
(3) Squirrel (4) None of these

15. She is performing which classical dance?



- (1) Mohini Attam (2) Kuchipudi
(3) Kathak (4) None of these

16. Where will you see this message or notice?
'SILENCE'

- (1) Zoo (2) Library
(3) Train (4) None of these

17. Identify the picture



- (1) Violin (2) Mridangam
(3) Veena (4) None of these

18. This is the picture of



- (1) Statue of Jesus (2) Statue of Liberty
(3) Eiffel Tower (4) None of these

19. A small shiny record which is played on special machines.



- (1) Fax machine (2) Computer
(3) Compact Disc (4) None of these

20. Throw your ice cream wrapper or stick in a

- (1) Bag (2) River
(3) Dust bin (4) None of these

