

# GENERAL KNOWLEDGE

1. Identify the character:



- (1) Scooby Doo
- (2) Baloo
- (3) Tweety
- (4) Uncle Scrooge

2. Name this picture.



- (1) Pomegranate
- (2) Guava
- (3) Pomelo
- (4) Plum

3. Name the primary colour.

- (1) Orange
- (2) Blue
- (3) Black
- (4) Purple

4. Identify the sign:



- (1) Right curve
- (2) Narrow bridge
- (3) Narrow road
- (4) No parking

5. What is this shape called?



- (1) Hexagon
- (2) Triangle
- (3) Rectangle
- (4) Square

6. Vedas is the holy book of

- (1) Hinduism
- (2) Islam
- (3) Buddhism
- (4) Christianity

7. Which is the odd one out?


(1)



(2)



(3)



(4)




8. Bear's sound is



- (1) gibber
- (2) screech
- (3) growl
- (4) bleat

9. I carry your loads-

(1)



(2)




(3)



(4)



10. Use picture clue to find the name of the festival.



- (1) Holi
- (2) Diwali
- (3) Christmas
- (4) Eid

11. How many Fridays are there in January?

January						
Sun	Mon	Tue	Wed	Thu	Fri	Sat
		1	2	3	4	5
6	7	8	9	10	11	12
13	14	15	16	17	18	19
20	21	22	23	24	25	26
27	28	29	30	31		

- (1) 4
- (2) 5
- (3) 6
- (4) 3

12. Which season typically has the hottest temperature?

- (1) Winter
- (2) Spring
- (3) Summer
- (4) Fall

13. Name the temple.



- (1) ISKCON Temple
- (2) Lotus Temple
- (3) Yogmaya Temple
- (4) Sai Baba Temple

14. Name the famous tourist attraction.



- (1) Taj Mahal
- (2) Lake Palace
- (3) Varanasi
- (4) Golden Temple

15. Who is Tiger Woods?

(1)



(2)



(3)



(4)



16. Kathakali dance originated from?



- (1) Andhra Pradesh
- (2) Tamil Nadu
- (3) Uttar Pradesh
- (4) Kerala

17. Who is A.P.J. Abdul Kalam?

(1)



(2)



(3)



(4)



18. This science tool is used to place a few drops of liquid in a container.





- (1) Forceps
- (2) Measuring cup
- (3) Thermometer
- (4) Dropper

19. Picture of Mouse-



20. Prime Minister of India-



21. Which is the longest river in India?

- (1) Kaveri
- (2) Gomti
- (3) Godavari
- (4) Ganges

22. Which is the popular sport of India?

- (1) Cricket
- (2) Football
- (3) Hockey
- (4) All of these

23. Where is parliament of India located.

- (1) Mumbai
- (2) New Delhi
- (3) Chennai
- (4) Kolkata

24. Name of the instrument to measure atmospheric pressure?

- (1) Barometer
- (2) Barograph
- (3) Bolometer
- (4) Callipers

25. Sattriya is a classical dance form of which state?

- (1) Manipur
- (2) Uttar Pradesh
- (3) Assam
- (4) Andhra Pradesh

# INTERACTIVE SECTION

26. A thermometer measures:

- (1) Temperature
- (2) Wind speed
- (3) Pressure
- (4) Light



27. Which phase of matter does not like to change its shape?



- (1) Gas
- (2) Liquid
- (3) Solid
- (4) All of the above

28. Which day we remember the death of Jesus?

- (1) Good Friday
- (2) Ramzan
- (3) Children's Day
- (4) Christmas Day



29. Birth Anniversary of India's First Vice-President Dr. S. Radhakrishnan is celebrated as-

- (1) Good Friday
- (2) Teacher's Day
- (3) Children's Day
- (4) Independence Day

30. See the Player. He is the Gold Medalist in 2008 Olympic (Beijing) for shooting?



- (1) Bijinder Kumar
- (2) Major Rathore
- (3) Abhinav Bindra
- (4) Ajay Jadeja

31. Which is the largest living bird on Earth?

- (1) Emu
- (2) Ostrich
- (3) Albatross
- (4) Siberian Crane




32. Where does the light of the Moon come from?

- (1) The Earth
- (2) Its own gases
- (3) The Sun
- (4) Saturn

33. Animals that have thick scales on the outsides are

- (1) Bird
- (2) Reptiles
- (3) Mammals
- (4) Amphibians

34. Who was known as Iron man of India?



35. Which type of creature is Pingu?

- (1) Pig
- (2) Penguin
- (3) Parrot
- (4) Elephat

36. Identify the picture



- (1) Jama Masjid
- (2) Qutub Minar
- (3) Charminar
- (4) Jantar Mantar

37. America was discovered in

- (1) 1491
- (2) 1492
- (3) 1493
- (4) 1494

38. The maximum gap between two successive leap year is

- (1) 4
- (2) 8
- (3) 2
- (4) 1

39. The Lotus temple is located at?



- (1) Chennai
- (2) Shimla
- (3) Lucknow
- (4) New Delhi

40. Which of the following is not pet animal?

(1)



(2)



(3)



(4)



**END OF THE EXAM**