


2. What is the name of the first cloned sheep?
 (1) Dolly (2) Tom
 (3) Alice (4) None of these
3. Frogs can live in salt water.
 (1) True (2) False
 (3) Can't say (4) None of these
4. Which of the following can be produced with the help of biotechnology?

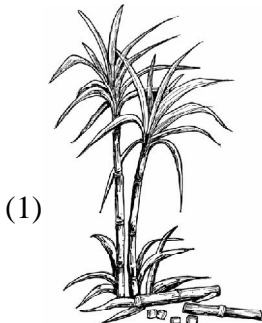


- (3) Both (1) and (2) (4) None of these


5. Biotechnology helps to
 (1) Reduce fuel use and carbondioxide emission
 (2) Increase air pollution
 (3) Reduce production of new medicines
 (4) None of these

EVS


6. The stem of which plant is used for eating?



Sugarcane






Tulips




Orchids

- (4) None of these

7. Which animal is very useful in deserts?



- (4) None of these
8. Meeting point of two bones is called
 (1) Muscle (2) Joint
 (3) Lens (4) None of these
9. Ponds and wells dry up in which season?



- (4) None of these
10. The change of water into ice is called
 (1) Melting (2) Evaporation
 (3) Freezing (4) None of these
11. Too many chocolates and sugary food is bad for our

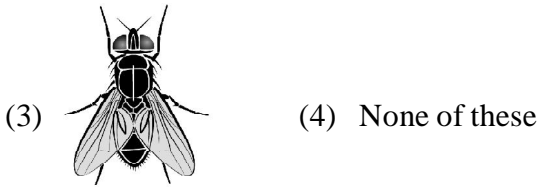
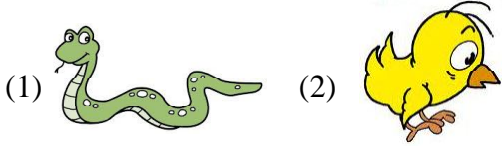


- (4) None of these


12. We resemble our parents in some way or other due to

- (1) Environment (2) Ecology
(3) DNA (4) None of these

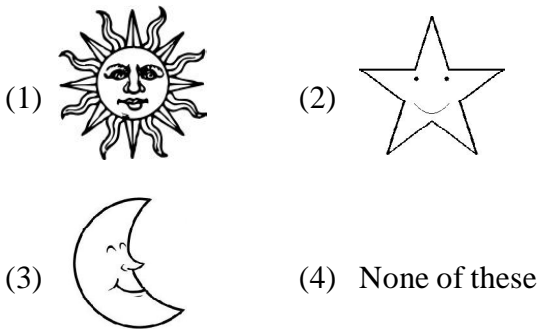
13. Which animal crawls on the ground?



14. Which is the ultimate source of energy on earth?



15. _____ rises in the east



16. What is true?

- (1) We should take meal at any time
(2) Eat food hurriedly
(3) Brush our teeth after taking meal
(4) None of these

17. 'Dust particles carry germs'. This statement is

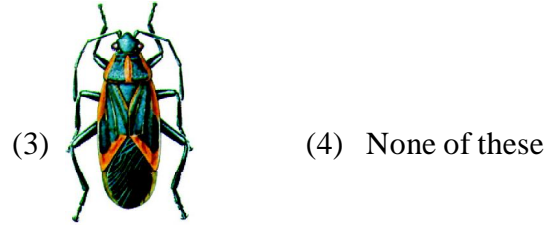
- (1) True (2) False
(3) Can't say (4) None of these

18. Which of the following is useful for us?



Mosquito

Earthworm



Bug

19. We use animals

- (1) To carry load
(2) To get milk and meat
(3) Both (1) and (2)
(4) None of these

20. Food should not be cooked on high flame for a long time because

- (1) It tastes good
(2) It may burn
(3) It becomes sweet
(4) None of these

INTERACTIVE SECTION

21.



The above cartoon shows the problems caused by

- (1) GM crops (2) Rabbits
(3) Penguins (4) None of these


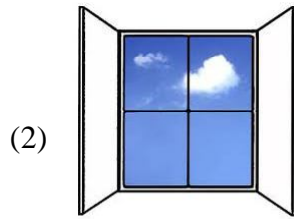
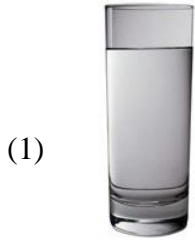
22. Fruit juices and syrups can be produced with the help of Biotechnology.

- (1) True (2) False
(3) Can't say (4) None of these

23. Which of the following resembles the shape of a ladder?


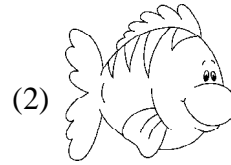
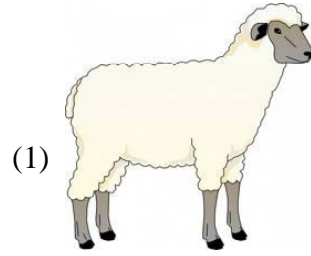
- (1) Tree
- (2) DNA
- (3) Horse
- (4) None of these

24. The size of an object changes when we see it through



(4) None of these

25. Find out the odd one from the following:



(4) None of these



END OF THE EXAM