



EHF

LEARNING FOR LIFE

EDUHEAL FOUNDATION

CLASS 1

LEVEL - 1

Set A1

EHF OLYMPIADS

- 4000 schools • 6 lakh students
- 10 olympiads • Global outreach



EHF

NATIONAL BIOTECHNOLOGY OLYMPIAD

Name :

Roll No :

Class :

School :



NATIONAL BIOTECHNOLOGY OLYMPIAD



NATIONAL MATHS OLYMPIAD



NATIONAL SCIENCE OLYMPIAD



INTERNATIONAL CYBER OLYMPIAD



INTERNATIONAL ENGLISH OLYMPIAD



INTERNATIONAL GENERAL KNOWLEDGE OLYMPIAD



BSE international finance olympiad (BIFO)



NATIONAL IIT-PMT OLYMPIAD (NIPO)

Level - 1 : All Level-1 successful* participants will get certificate, aptitude report and online subscription, and school toppers will be eligible for school hero medals.

Level - 2 : School toppers* will be selected for level-2-National level - online computer based interactive test held at exam centres all over India. Besides selection for level-3, winner will get merit certificate, medals, educational CDs, laptop, scholarship and other prizes. There is no level-2 in Art and Cricket.

Level - 3 : Toppers will qualify* for level-3-International level-where you will compete with students globally. Get selected for EHF's International Olympiad training camp. Only Indian organization giving students exposure to global competitions. Represent India & win laurels. Guidance by top scientists. Prizes ranges from cash (millions of \$), gadgets, foreign trips, publicity, fame, scholarships, Internships, conference participation and more.

* # See prospectus website for details

Instructions for the Candidate

1. You are allowed additional 10 minutes to fill the required details in the RESPONSE SHEET (OMR).
2. The question paper is made as per syllabus guidelines & pattern given in the information Booklet. The Question Paper for Classes 1 to 6 contains 25 Questions each to be answered in 40 minutes. The Question paper for classes 7 to 12 contains 50 Questions each to be answered in 60 minutes. All questions are compulsory. Further instructions are given in the instruction letter to the teacher.
3. Use the response sheet to mark your responses by darkening the required circle. The response sheet has to be returned to the foundation, duly filled in. THE STUDENT CAN RETAIN THE QUESTION PAPER.

WEBSITE : WWW.EDUHEALFOUNDATION.ORG
E-MAIL : INFO@EDUHEALFOUNDATION.ORG

ROUGH WORK

GENERAL KNOWLEDGE

1. Number of sense organs in a human body-
- (1) 4
 - (2) 3
 - (3) 5
 - (4) None of these

2. Name the picture.



- (1) Sun and Earth
- (2) Moon and Clouds
- (3) Earth and Moon
- (4) None of these

3. Plants grow in

- (1) air
- (2) soil
- (3) space
- (4) none of these

4. Which is the slowest?


(1)



(2)



(3)



(4) None of these

5. Honey is a _____ food.

- (1) sweet
- (2) sour
- (3) bitter
- (4) none of these

EVS

6. Which of the following is a herb?

(1)



(2)




- (3) Both (1) and (2)
- (4) None of these

7. Which of the following is an amphibian?


(1)



(2)




(3)



(4) None of these

8. Which Bird eats insects?

(1)



(2)



(3)



(4) None of these

9. We all take in

(1) Oxygen

(2) Carbon dioxide

(3) Nitrogen

(4) None of these

10. Given picture is an example of _____



(1) Precipitation

(2) Condensation

(3) Evaporation

(4) None of these

11. The Earth revolves around the Sun and it takes

(1) 365 days

(2) 1 day

(3) 24 hours

(4) none of these

12. Planet on which we are living is known as

(1) Jupiter

(2) Mars

(3) Earth

(4) None of these

13. Number of Planets in our Solar System is

- (1) 8
- (2) 9
- (3) 7
- (4) None of these

14. Tomato is a




- (1) fruit
- (2) vegetable
- (3) cereal
- (4) none of these




15.  This is used in ____ season.

- (1) summer
- (2) winter
- (3) rainy
- (4) none of these

16. Do not play with

- (1) 
- (2) 
- (3) 
- (4) None of these


17. Which among the following is a domestic animal?

- (1) 

(2)




(3)



(4) None of these

18. A person who travels in spacecraft-





- (1) engineer
- (2) astronaut
- (3) doctor
- (4) none of these

19. Which is a farm animal?


- (1) Cow
- (2) Sheep
- (3) Both (1) and (2)
- (4) None of these

20. What do plants need?

- (1) Light 
- (2) Air 
- (3) Both (1) and (2)
- (4) None of these

INTERACTIVE SECTION

21. Name it:



- (1) Train
- (2) Car
- (3) Scooter
- (4) None of these

22. Letter box-



- (1) Letters
- (2) Balls
- (3) Clothes
- (4) None of these

23. Number of wheels in the picture-



- (1) 2
- (2) 3
- (3) 4
- (4) None of these

24. A tailor stitches our

(1)



(2)




- (3) both (1) and (2)
- (4) none of these

25. Which of the following is a fruit?

(1)



(2)



(3)



- (4) None of these



END OF THE EXAM