









- (3) 5 (4) None of these
4. How many months are there in a year ?  
 (1) 12 (2) 13  
 (3) 11 (4) 10
5. Ring the biggest number  
 11, 19, 91, 89, 90  
 (1) 90 (2) 91  
 (3) 89 (4) 11

## MATHEMATICS


6. How many TV sets are there?  
  
 (1) 14 (2) 12  
 (3) 15 (4) none of these

7. How many sticks are there?  
  
 (1) 20 (2) 18  
 (3) 24 (4) none of these





8. Which item's shape is cube?  
 (1)  (2)   
 (3)  (4) none of these

9. Which items are shaped like cylinder?  
 (1) A match box (2) Pepsi cane  
 (3) Chapatti (4) none of these
10. How many sides does this shape have?  
  
 (1) 2 (2) 3  
 (3) 4 (4) none of these

11. Zero plus nine makes  
 (1) 8 (2) 90  
 (3) 9 (4) 09

12. Add :  $6 + 3 =$   
  
 (1) 7 (2) 9  
 (3) 61 (4) 16


13. Start with 4 and follow me. Add 2, add 3 subtract 1, add 2. What is the number ?  
 (1) 6 (2) 8  
 (3) 9 (4) 10






14. Which of the following items looks most like a cone?  
 (1)  (2)   
 (3)  (4) 

15. What is the shape of the clock given below ?



- (1) cube (2) circle  
 (3) sphere (4) square

16. What is this shape?  
  
 (1) triangle (2) square  
 (3) rectangle (4) circle

17. What is missing ?  
  
 (1)  (2)   
 (3)  (4) 

18. Your class begins at 9:30 and ends at 10:30. How long was the class ?

- (1) 1 hour                      (2) 2 hour  
(3) 1.5 hour                    (4) 2.5 hour

19. How many years are in a decade ?

- (1) 100                          (2) 10  
(3) 24                            (4) 1000




20.  $5 + 5 - 3 =$

- (1) 3                              (2) 7  
(3) 4                              (4) 5




**ETG INTERACTIVE SECTION**

21. What comes next ?

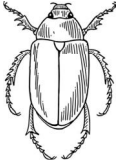





- (1)                       (2)   
(3)                       (4) 


22. Select the bucket with the most spots?


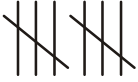


- (1)                       (2)   
(3)                       (4) none of these

23. Select the animal which have most legs?



- (1)                       (2)   
(3)                       (4) 

24. Count the stars given below and make the tally .



- (1)                       (2)   
(3)                       (4) 

25. Add :  $4 + 2 =$

-  +  =  
(1) 6                              (2) 34  
(3) 43                              (4) 0



**END OF THE EXAM**