



# EDUHEAL FOUNDATION

EDUHEAL FOUNDATION CONDUCTS 8 OLYMPIADS ANNUALLY REACHING OUT TO 3,500 + SCHOOLS

• 5 LAKH + STUDENTS • 50,000 TEACHERS AND HAVING 500 RESOURCE PERSONS

IN ENGLISH / MATHS / SCIENCE / BIOTECH / COMPUTER / G.K. / ARTS / CRICKET / FINANCE & 300 REGIONAL COORDINATORS.

WEBSITE : [WWW.EDUHEALFOUNDATION.ORG](http://WWW.EDUHEALFOUNDATION.ORG) • E-MAIL : [INFO@EDUHEALFOUNDATION.ORG](mailto:INFO@EDUHEALFOUNDATION.ORG)

<b>ICO</b> INTERNATIONAL CYBER OLYMPIAD	<b>NISO</b> NATIONAL INTERACTIVE SCIENCE OLYMPIAD	<b>NIMO</b> NATIONAL INTERACTIVE MATHS OLYMPIAD	<b>NBTO</b> NATIONAL BIOTECHNOLOGY OLYMPIAD	<b>IEO</b> INTERNATIONAL ENGLISH OLYMPIAD	<b>IGO</b> INTERNATIONAL G.K. OLYMPIAD	<b>BIFO</b> BSE INTERNATIONAL FINANCE OLYMPIAD	<b>NIPO</b> NATIONAL IIT-PMT OLYMPIAD
---	---	---	---	---	--	--	---

**Level - 1** : All Level-1 successful\* participants will get certificate, aptitude report and online subscription, and school toppers will be eligible for school hero medals.

**Level - 2** : School toppers\* will be selected for level-2-National level - online computer based interactive test held at exam centres all over India. Besides selection for level-3, winner will get merit certificate, medals, educational CDs, laptop, scholarship and other prizes. There is no level 2 in Art, G.K. and Biotech.

**Level - 3** : Toppers will qualify# for level 3-International level-where you will compete with students globally. Get selected for EHF's International Olympiad training camp. Only Indian organization giving students exposure to global competitions. Represent India & win laurels. Guidance by top scientists. Prizes ranges from cash (millions of \$), gadgets, foreign trips, publicity, fame, scholarships, Internships, conference participation and more. Level 3 is in Maths, Science & Cyber only.

# See prospectus/website for details

- You are allowed additional 10 minutes to fill the required details in the **RESPONSE SHEET (OMR)**. **STUDENTS OF CLASS 1 & 2 HAVE TO UNDERLINE** THE CORRECT ANSWER IN THE QUESTION PAPER ITSELF. THEY ARE NOT REQUIRED TO USE THE RESPONSE SHEET (OMR). THEY HAVE TO FILL THEIR NAME, ROLL NUMBER, CLASS, SCHOOL NAME IN THE SPACE PROVIDED IN THE QUESTION PAPER.
- The question paper is made as per syllabus guidelines & pattern given in the information Booklet. The Question Paper for Classes 1 to 6 contains 25 Questions each to be answered in 40 minutes. The Question paper for classes 7 to 12 contains 50 Questions each to be answered in 60 minutes. All questions are compulsory. Further instructions are given in the instruction letter to the teacher.
- Use the response sheet to mark your responses by darkening the required circle. The response sheet has to be returned to the foundation, duly filled in. **THE STUDENT CAN RETAIN THE QUESTION PAPER EXCEPT FOR CLASSES 1 AND 2.**

**EHF NATIONAL INTERACTIVE MATHS OLYMPIAD**

**N I M O**

**2 Class** **A1 Paper Code**

**LEVEL - 1**

Academic Partner — [WWW.EDUSYS.IN](http://WWW.EDUSYS.IN)

**EtG BOOKS** Creating SUCCESS Stories

A UNIT OF EDUSYS LEARNING MEDIA

AIEEE • IIT • PMT • OLYMPIADS

**intel** INTERNATIONAL SCIENCE AND ENGINEERING FAIR

Google Science Fair

**H** THE HARVARD - MIT MATHEMATICS TORNAMENT

**ORACLE ThinkQuest** EDUCATION FOUNDATION

**CLASS 1 AND 2 STUDENTS MUST FILL THIS (IN CAPITAL LETTERS ONLY)**

Student Name

\_\_\_\_\_

School Name

\_\_\_\_\_

Roll No.

School Code

□ □ □ □ □

Serial Number

□ □ □

Class

□ □

## MENTAL ABILITY

- I am a boy and I love cycling.  
I am a girl and I love reading.  
After reading both the sentences, choose the 30th alphabet.  
(1) r (2) l  
(3) i (4) none of these

2.






Which is the sixth letter from the right?

- (1) R (2) E  
(3) I (4) None of these






14. Lila went to a bird refuge and saw two ducks, ten eagles, and eight penguins. She made a table of the birds at the refuge. Which is her table?

(1)

		
1	10	8

(2)

		
2	10	8

- (3) can't say  
 (4) none of these

15. What is the total weight of the onions and tomatoes?







- (1) 54 kg                      (2) 45 kg  
 (3) 55 kg                      (4) None of these

16. Look at the picture:







Which table shows the correct number of leaves and strawberries?

(1)






	
	

(2)

- (3) can't say  
 (4) none of these

Jignesh, Jaya, Tanya, Kavya and Manoj went on an Easter egg hunt. The graph shows how many eggs each child found. Use the graph to answer the question no. 17 to 19.

Jignesh	
Jaya	
Tanya	
Kavya	
Manoj	

17. How many eggs did Jignesh find ?

- (1) 6                                      (2) 8  
 (3) 3                                      (4) None of these

18. Who found the most eggs ?

- (1) Jignesh                              (2) Jaya  
 (3) Manoj                              (4) None of these

19. Who all found the same number of eggs ?

- (1) Jaya and Kavya  
 (2) Kavya and Manoj  
 (3) Jaya and Tanya  
 (4) Jignesh and Jaya






20. If today is Tuesday and day after tomorrow is Thursday, then what is tomorrow?

- (1) Wednesday                      (2) Friday  
 (3) Monday                              (4) None of these

### INTERACTIVE SECTION

21. What comes next ?






- (1)                        (2)  
- (3)                       (4) None of these

22. What comes next ?

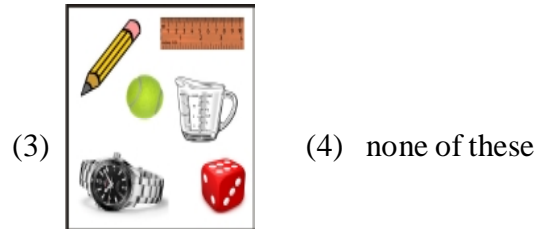



- (1)  (2)   
(3)  (4) None of these

23. Select the frog with the most spots?

- (1)  (2)   
(3)  (4) none of these

24. Select the group that has most items.



25. What time is shown in the clock?



- (1) 10 O'clock (2) 8 O'clock  
(3) 12 O'clock (4) 6 O'clock



**END OF THE EXAM**