



EduHeal Foundation

EDUHEAL FOUNDATION CONDUCTS 10 OLYMPIADS ANNUALLY REACHING OUT TO 3,500 + SCHOOLS

• 5 LAKH + STUDENTS • 50,000 TEACHERS AND HAVING 500 RESOURCE PERSONS
IN ENGLISH / MATHS / SCIENCE / BIOTECH / COMPUTER / G.K. / ARTS / CRICKET / FINANCE & 300 REGIONAL COORDINATORS.

WEBSITE : WWW.EDUHEALFOUNDATION.ORG • E-MAIL : INFO@EDUHEALFOUNDATION.ORG

ICO INTERNATIONAL CYBER OLYMPIAD	NISO NATIONAL INTERACTIVE SCIENCE OLYMPIAD	NIMO NATIONAL INTERACTIVE MATH OLYMPIAD	NBTO NATIONAL BIOTECHNOLOGY OLYMPIAD	IEO INTERNATIONAL ENGLISH OLYMPIAD	IGO INTERNATIONAL G.K. OLYMPIAD	BIFO BSE INTERNATIONAL FINANCE OLYMPIAD	NIPO NATIONAL IIT-PMT OLYMPIAD
---	---	--	--	---	--	--	---

Level - 1 : All Level-1 successful* participants will get certificate, aptitude report and online subscription, and school toppers will be eligible for school hero medals.

Level - 2 : School toppers* will be selected for level-2-National level - online computer based interactive test held at exam centres all over India. Besides selection for level-3, winner will get merit certificate, medals, educational CDs, laptop, scholarship and other prizes. There is no level 2 in Art, Cricket, Cyber, NIPO and Biotech.

Level - 3 : Toppers will qualify# for level 3-International level-where you will compete with students globally. Get selected for EHF's International Olympiad training camp. Only Indian organization giving students exposure to global competitions. Represent India & win laurels. Guidance by top scientists. Prizes ranges from cash (millions of \$), gadgets, foreign trips, publicity, fame, scholarships, Internships, conference participation and more.

* # See prospectus/website for details

1. You are allowed additional 10 minutes to fill the required details in the **RESPONSE SHEET (OMR)**.
2. The question paper is made as per syllabus guidelines & pattern given in the information Booklet. The Question Paper for Classes 1 to 6 contains 25 Questions each to be answered in 40 minutes. The Question paper for classes 7 to 12 contains 50 Questions each to be answered in 60 minutes. All questions are compulsory. Further instructions are given in the instruction letter to the teacher.
3. Use the response sheet to mark your responses by darkening the required circle. The response sheet has to be returned to the foundation, duly filled in. **THE STUDENT CAN RETAIN THE QUESTION PAPER.**

EHF
NATIONAL
INTERACTIVE
MATHS
OLYMPIAD

N I M O

1
Class

B1
Paper
Code


LEVEL - 1

MENTAL ABILITY

1. Which of these is a circle?


- (1)  (2) 
- (3)  (4) None of these

2. Preeti and Ritu are playing a game. Preeti asked Ritu to move 3 steps away from her. If Ritu is on 4th step, where she will be after moving?



- (1) 5th step (2) 3rd step
- (3) 1st step (4) None of these

3. I have three sides. Who am I?



- (1) Circle (2) Triangle
- (3) Square (4) None of these

4. Which of the following is the correct order from the tallest to the shortest?



- (1) Suhani, Ella, Monu, Sonia

- (2) Sonia, Suhani, Ella, Monu
- (3) Ella, Monu, Sonia, Suhani
- (4) None of these

5. When does Sun rise?

- (1) Morning
- (2) Night
- (3) Noon
- (4) None of these

MATHEMATICS

6. Count the number of circles.



- (1) 2
- (2) 1
- (3) 4
- (4) None of these

7. Which number comes just after 34?

- (1) 33
- (2) 35
- (3) 36
- (4) None of these

8. Choose the correct sign.



- (1) +
- (2) ×
- (3) -
- (4) None of these

9. Choose the correct sign $6 \square 4 = 10$

- (1) +
- (2) -
- (3) ×
- (4) None of these

10. Which items are shaped like a cone?

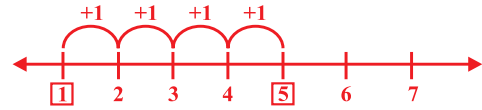
- (1) (2)
- (3) (4) None of these

11. How many more to make 10?



- (1) 3
- (2) 4
- (3) 5
- (4) None of these

12. Which addition sentence does this model show?



- (1) $1 + 5 = 6$
- (2) $1 + 4 = 5$
- (3) $1 + 6 = 7$
- (4) None of these

13. Which is the correct number word for 9?

- (1) Nineteen
- (2) Ninety
- (3) Nine
- (4) None of these

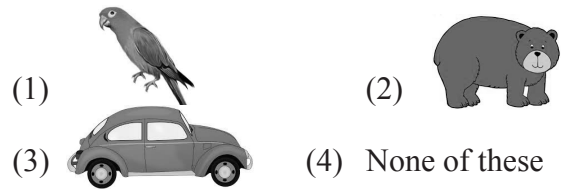
14. Which bottle is shorter?



A B C

- (1) A
- (2) B
- (3) C
- (4) None of these

15. Which is lighter?

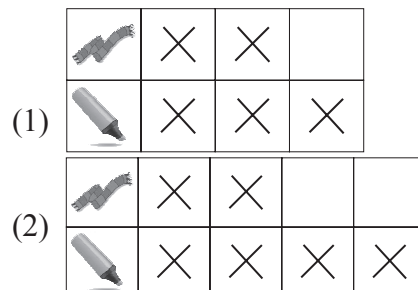


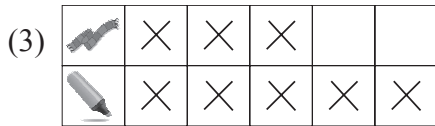
- (1)
- (2)
- (3)
- (4) None of these

16. Look at the picture.



Which graph shows the number of scarves and highlighters?





(4) None of these

17. Reena asked her classmates to vote for their favourite dessert. She made a table of their votes.

Dessert			
How Many?	8	6	2

Which dessert did more people vote for?

- (1) (2)
- (3) (4) None of these

18. How many days are there in a week?

- (1) 7 (2) 2
- (3) 3 (4) None of these

19. Thursday is the _____ day of the week?

- (1) Fifth (2) Second
- (3) Fourth (4) None of these


20. Where is the flower?



- (1) Left (2) Middle
- (3) Right (4) None of these

INTERACTIVE SECTION

21. Count the number of fruits.



- (1) 6 (2) 5
- (3) 7 (4) None of these

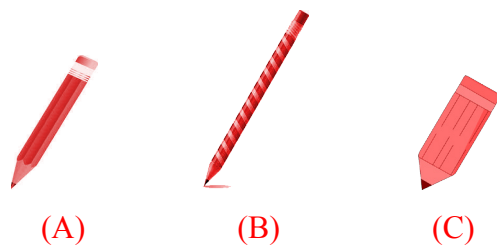
22. Count the Cupcakes.



Which figure given below shows 1 more?

- (1) (2)
- (3) (4) none of these


23. Look at the pencils.



Which choice correctly shows the order of the pencils from shortest to longest?

- (1) A, B, C (2) B, C, A
- (3) C, A, B (4) None of these

24. In a given pictures G stands for green, B stands for blue, R stands for red and P stands for purple. How many red circles are there?



- (1) 1 (2) 2
- (3) 3 (4) None of these

25. How many sides does the dice have?



- (1) Four sides (2) Five sides
- (3) Six sides (4) None of these



END OF THE EXAM