



EHF
LEARNING FOR LIFE

**EDUHEAL
FOUNDATION**

**CLASS
1**

LEVEL - 1

Set A1

EHF OLYMPIADS

- 4000 schools • 6 lakh students
- 10 olympiads • Global outreach



EHF

**NATIONAL INTERACTIVE
MATHS OLYMPIAD**

Name :


Roll No :

Class :

School :



**NATIONAL
BIOTECHNOLOGY
OLYMPIAD**



**NATIONAL
MATHS
OLYMPIAD**



**NATIONAL
SCIENCE
OLYMPIAD**



**INTERNATIONAL
CYBER
OLYMPIAD**



**INTERNATIONAL
ENGLISH
OLYMPIAD**



**INTERNATIONAL
GENERAL KNOWLEDGE
OLYMPIAD**



BSE international finance olympiad (BIFO)



NATIONAL IIT-PMT OLYMPIAD (NIPSO)

Level - 1 : All Level-1 successful* participants will get certificate, aptitude report and online subscription, and school toppers will be eligible for school hero medals.

Level - 2 : School toppers* will be selected for level-2-National level - online computer based interactive test held at exam centres all over India. Besides selection for level-3, winner will get merit certificate, medals, educational CDs, laptop, scholarship and other prizes. There is no level-2 in Art and Cricket.

Level - 3 : Toppers will qualify* for level-3-International level-where you will compete with students globally. Get selected for EHF's International Olympiad training camp. Only Indian organization giving students exposure to global competitions. Represent India & win laurels. Guidance by top scientists. Prizes ranges from cash (millions of \$), gadgets, foreign trips, publicity, fame, scholarships, Internships, conference participation and more.

* # See prospectus website for details

Instructions for the Candidate

1. You are allowed additional 10 minutes to fill the required details in the RESPONSE SHEET (OMR).
2. The question paper is made as per syllabus guidelines & pattern given in the information Booklet. The Question Paper for Classes 1 to 6 contains 25 Questions each to be answered in 40 minutes. The Question paper for classes 7 to 12 contains 50 Questions each to be answered in 60 minutes. All questions are compulsory. Further instructions are given in the instruction letter to the teacher.
3. Use the response sheet to mark your responses by darkening the required circle. The response sheet has to be returned to the foundation, duly filled in. THE STUDENT CAN RETAIN THE QUESTION PAPER.

WEBSITE : WWW.EDUHEALFOUNDATION.ORG
E-MAIL : INFO@EDUHEALFOUNDATION.ORG

ROUGH WORK

MENTAL ABILITY


1. Complete the number pattern below:



The missing number is _____.


- (1) 23 (2) 27
 (3) 25 (4) None of these

2. Which of the following is the correct addition sentence for the given picture?



- (1) $2 + 2$ (2) $3 + 2$
 (3) $4 + 2$ (4) None of these

3. Count the rings and write the number.



There are _____ rings altogether.

- (1) 20 (2) 25
 (3) 30 (4) None of these
4. Ritu, Deepti and Srishti are sitting in a row. Srishti is sitting between Ritu and Deepti. Which of following is the correct order?
- (1) Ritu, Deepti, Srishti (2) Ritu, Srishti, Deepti
 (3) Srishti, Ritu, Deepti (4) None of these
5. A book costs ₹45. Shruti has only ₹22 now. How much more money does she need to buy the book?
- (1) ₹23 (2) ₹20
 (3) ₹15 (4) None of these


MATHEMATICS

6. Choose the set that shows a smaller number.




- (1) Set A (2) Set B
 (3) Both have equal (4) None of these

7. 5 ducks are swimming and 4 ducks are on land. How many ducks are there altogether?



- (1) 9 ducks
 (2) 4 ducks
 (3) 1 duck
 (4) None of these

8. Father used 6 envelopes and 16 envelopes left. How many envelopes did he have at first?



- (1) 18 (2) 20
(3) 22 (4) None of these

9. Look at the pictures below. Choose all the things that have the shape of a rectangle.



Mirror



Clock



Pencil Box



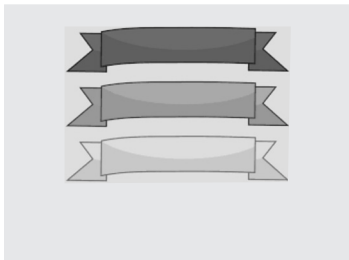
Notebook



Ball

- (1) Clock and mirror
(2) Pencil box and notebook
(3) Ball and mirror
(4) None of these

10. How many more ribbons should be added in the space given to make the total 10?




- (1) 5 (2) 6
(3) 7 (4) None of these

11. Choose the shape that comes next.




- (1)  (2) 
(3)  (4) None of these

12. Which animal is in the first position?




- (1) Wolf (2) Elephant
(3) Monkey (4) None of these

13. Identify the odd one out.




- (1) A (2) B
(3) C (4) None of these

14. Choose the two balloons that make 22.



- (1) A and C
(2) B and D
(3) B and E
(4) None of these

15. How much heavier is the book than the apple?



Use  as 1 unit

- (1) 4 (2) 5
 (3) 6 (4) None of these

16. Mitali is 7 years old this year. There are some candles on her birthday cake. How many more candles does she need?



- (1) 2 (2) 3
 (3) 4 (4) None of these

17. I am a number below 20. When 8 is added to me, I become 12. What number am I?



- (1) 12 (2) 4
 (3) 8 (4) None of these

18. Count the number of flowers and find the answer.



- (1) 40 (2) 15
 (3) 45 (4) None of these

19. What time is this?

6:30 pm

- (1) Six Thirty pm (2) Six Thirty am
 (3) Six O'Clock (4) None of these

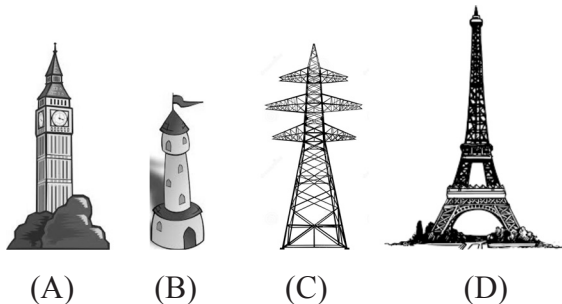
20. Mani and her family are about to eat dinner. What is a good time to eat dinner?



- (1) 4: 00 a.m. (2) 3: 00 p.m.
 (3) 7:00 p.m. (4) None of these

INTERACTIVE SECTION

21.



Tower A is higher than Tower _____ but lower than Tower D.

- (1) A
 (2) B
 (3) C
 (4) None of these

22. This graph shows the favourite fruits of a group of children. Each fruit stands for 1 child.

Strawberry	Pineapple	Passion Fruit	Pomegranate

_____ more children like strawberry than pomegranate.

- (1) 3 (2) 4
(3) 5 (4) None of these

23. + = 6

= 4

= ?

- (1) 3
(2) 5

- (3) 8
(4) None of these

24. Anu wants to buy the third fruit basket from the left. Which fruit basket does she want?



(1) Option A

(2) Option B

(3) Option C

(4) None of these

25. At first shop dress costs ₹490. At second shop same dress costs ₹550. How much more does the second shop cost than the first shop?



- (1) ₹60
(3) ₹50

- (2) ₹70
(4) None of these



END OF THE EXAM