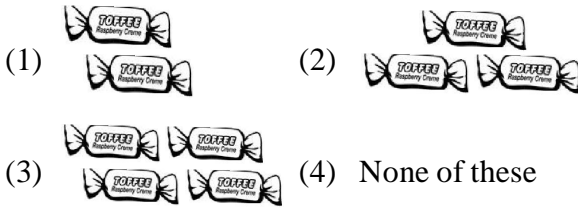
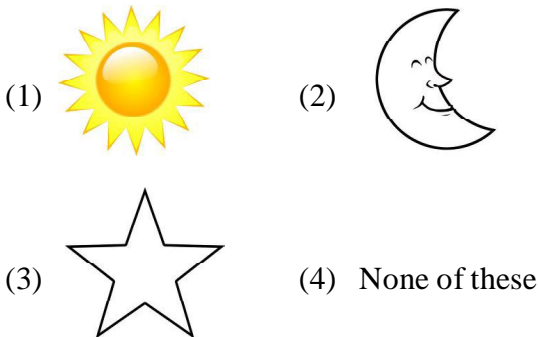


4. You have 6 toffees with you. You gave 2 of them to your friend. How many toffees are left with you ?



5. Which of the following can you see during the day ?






GENERAL SCIENCE

6. Air has more water vapour in_____.



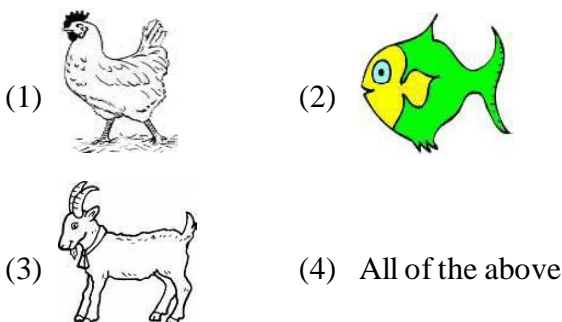
(3) Both (1) and (2) (4) None of these

7. Animals like ,  and 

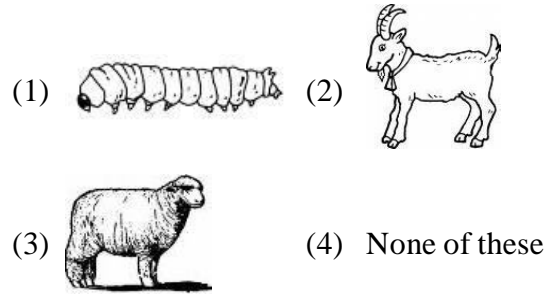
give us milk and so are called as

(1) Milch animals (2) Wild animals
(3) Riding animals (4) None of these


8. Some people eat flesh or meat of



9. Silk is obtained from the silk fibre of

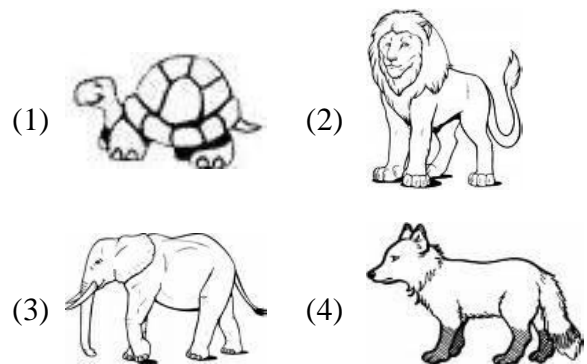


10. Match the following

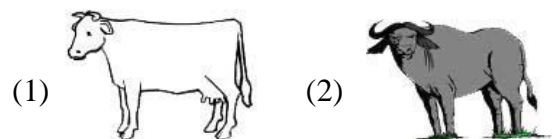


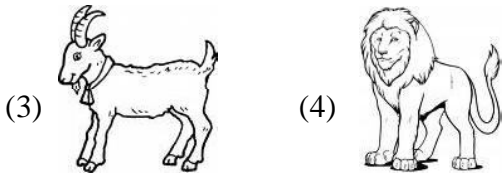
(1) A-2, B-1, C-4, D-3
(2) A-4, B-2, C-1, D-3
(3) A-3, B-4, C-1, D-2
(4) A-1, B-2, C-4, D-3

11. An animal that carries a shell on its back




12. Find the odd one out.








13. Which of the following food contains protein?

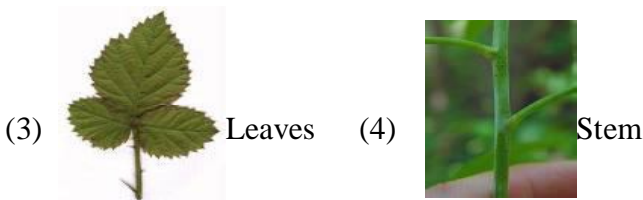


(4) All of the above

14.  ,  and  are rich in _____

- (1) Proteins (2) Vitamins
 (3) Carbohydrates (4) None of these

15. Trees have hard, strong and woody _____.



16. The hard, strong and woody stem of a tree is



17. What are these?



- (1) Shrubs (2) Herbs
 (3) Trees (4) None of these

18.  made up of ?

- (1) Bricks (2) Cement
 (3) Iron (4) All of these

19.  are made of


- (1) Mud (2) Bricks
 (3) Stones (4) All of these


20.  is called a _____ boat.

- (1) House (2) Room
 (3) Terrace (4) None of these

ETG INTERACTIVE SECTION


21. Which of the following is the young one of Hen ?



- (3)  (4) None of these


22. Find the odd one out


- (1)  (2) 

- (3)  (4) None of these



23. Which of the following is used by




- (1)  (2) 

- (3)  (4) None of these


24. Bamboo leaves are the favourite food of

- (1)  (2) 

- (3)  (4) None of these

25. All children like to eat

- (1)  (2) 

- (3)  (4) None of these



END OF THE EXAM