


3. 11:00 is an hour after _____.
- (1) 10:00 (2) 12:00
 (3) 1:00 (4) None of these
4. The position of L from left in the word given in the figure is :



- (1) 1st (2) 2nd
 (3) 3rd (4) None of these
5. How many squares are there in the given figure?



- (1) 2 (2) 1
 (3) 3 (4) None of these

GENERAL SCIENCE

6. This is a




- (1) Squirrel (2) Kangaroo
 (3) Chameleon (4) Camel

7. This is a




- (1) Vulture (2) Panda
 (3) Bear (4) None of these

8. What is common in all these pictures?



- (1) Smoke (2) Water
 (3) Fresh air (4) None of these

9. What is this called?



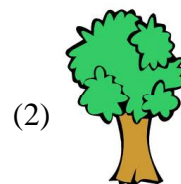
- (1) Weather cock (2) Barometer
 (3) Clock (4) None of these

10. *You can't see me
 You can only feel me
 I'm all around you
 You breathe me all the time!*

What am I ?

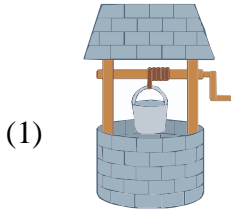
- (1) Air (2) Water
 (3) Dew (4) None of these

11. _____ are the lungs of the earth.



- (4) None of these

12. ____ water is not used for drinking.



(4) None of these

13. Where should we keep clean water?

- (1) In the dirty container.
- (2) In the clean & closed container.
- (3) In an open chamber.
- (4) None of these

14. We can use rain water for:



- (1) Drinking
- (2) Watering plants
- (3) Cleaning floors
- (4) Both (2) and (3)

Choose the sense organs which you use when you do the following:

15.  listening to a song

- (1) Tongue
- (2) Eyes
- (3) Nose
- (4) Ears

16.  smelling a perfume

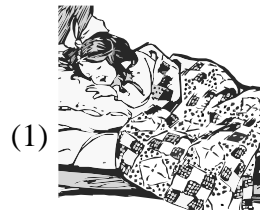
- (1) Eyes
- (2) Tongue
- (3) Ears
- (4) Nose

17. Which is the good habit to keep yourself clean?

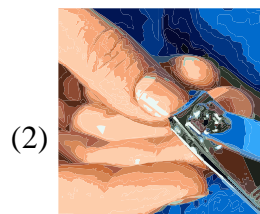


- (3) Both (1) & (2)
- (4) None of these


18. Which shouldn't be followed to maintain a healthy lifestyle?



Go to bed early at night



Trim nails regularly



Get up early in the morning.

- (4) None of these

19. Does the illustrated picture below demonstrate a good safety measure?



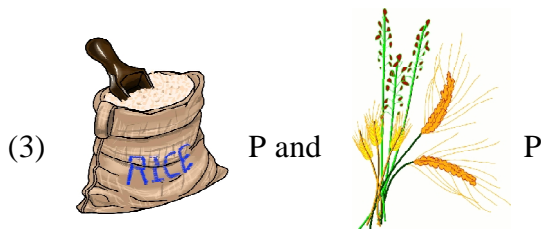
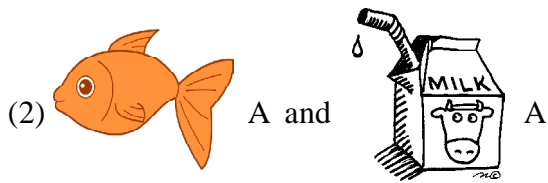
- (1) Yes (2) No
 (3) Can't say (4) None of these

20. The complete food for new born baby is

- (1) Vegetable (2) Fruits
 (3) Milk (4) None of these

INTERACTIVE SECTION

21. P stands for food which we get from plants and A for food which we get from animals. Choose the correctly labelled part.

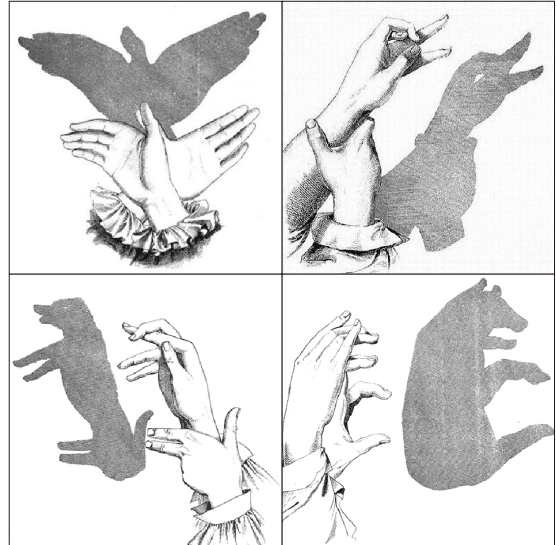


- (4) Both (2) and (3)

22. Mark the things needed in the first-aid box.



23. What are these called?



- (1) Magic (2) Shadows
 (3) Light (4) None of these

24. *I SPIN ON MY OWN AND THAT'S HOW DAY AND NIGHT ARE BORN.*

Guess who am I?

- (1) Sun (2) Earth
 (3) Moon (4) None of these

25. *Guess who am I?*

___ MOVES AROUND THE SUN GIVING US ALL THE SEASONS OF FUN.

- (1) Sun (2) Earth
 (3) Moon (4) None of these



END OF THE EXAM