



EHF

LEARNING FOR LIFE

EDUHEAL FOUNDATION

CLASS 1

LEVEL - 1

Set A1

EHF OLYMPIADS

- 4000 schools • 6 lakh students
- 10 olympiads • Global outreach



EHF

NATIONAL INTERACTIVE SCIENCE OLYMPIAD

Name :

Roll No :

Class :

School :



**NATIONAL
BIOTECHNOLOGY
OLYMPIAD**



**NATIONAL
MATHS
OLYMPIAD**



**NATIONAL
SCIENCE
OLYMPIAD**



**INTERNATIONAL
CYBER
OLYMPIAD**



**INTERNATIONAL
ENGLISH
OLYMPIAD**



**INTERNATIONAL
GENERAL KNOWLEDGE
OLYMPIAD**



BSE international finance olympiad (BIFO)



NATIONAL IIT-PMT OLYMPIAD (NIPO)

Level - 1 : All Level-1 successful* participants will get certificate, aptitude report and online subscription, and school toppers will be eligible for school hero medals.

Level - 2 : School toppers* will be selected for level-2-National level - online computer based interactive test held at exam centres all over India. Besides selection for level-3, winner will get merit certificate, medals, educational CDs, laptop, scholarship and other prizes. There is no level-2 in Art and Cricket.

Level - 3 : Toppers will qualify* for level-3-International level-where you will compete with students globally. Get selected for EHF's International Olympiad training camp. Only Indian organization giving students exposure to global competitions. Represent India & win laurels. Guidance by top scientists. Prizes ranges from cash (millions of \$), gadgets, foreign trips, publicity, fame, scholarships, Internships, conference participation and more.

* # See prospectus/website for details

Instructions for the Candidate

1. You are allowed additional 10 minutes to fill the required details in the RESPONSE SHEET (OMR).
2. The question paper is made as per syllabus guidelines & pattern given in the information Booklet. The Question Paper for Classes 1 to 6 contains 25 Questions each to be answered in 40 minutes. The Question paper for classes 7 to 12 contains 50 Questions each to be answered in 60 minutes. All questions are compulsory. Further instructions are given in the instruction letter to the teacher.
3. Use the response sheet to mark your responses by darkening the required circle. The response sheet has to be returned to the foundation, duly filled in. THE STUDENT CAN RETAIN THE QUESTION PAPER.

WEBSITE : WWW.EDUHEALFOUNDATION.ORG
E-MAIL : INFO@EDUHEALFOUNDATION.ORG


ROUGH WORK

GENERAL IQ

1. Which of the following is useful for both Rainy and Sunny days?


- (1) Umbrella
- (2) Rain coat
- (3) Sweater
- (4) None of these

2. Which of the following should you wear while going to school?



(4) None of these

3. Which of the following is hottest?



(2)

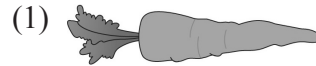
(3)

(4) None of these

4. Which body part can be related with a clock?

- (1) Legs
- (2) Hands
- (3) Face
- (4) None of these

5. Which of the following can be eaten raw?



(3) Both (1) and (2)

(4) None of these


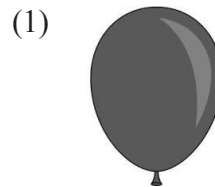
GENERAL SCIENCE

6. Which of the following can live both in land & water?



(4) None of these

7. In which of the following can you fill air with your mouth?



(4) None of these


8. In which of the work do you need drinking water?

- (1) Cooking
- (2) Washing clothes
- (3) Bathing
- (4) None of these

9. Select the figure that is related with body organ?



(1)



(2)



(3)

(4) None of these

10. Which one should Sundeep drink before going to school?

(1)



(2)



(3)



(4) None of these

11. Which is not a good habit?

- (1) Cutting down nails
- (2) Washing you hands before meals
- (3) Taking bath daily
- (4) None of these

12. In which of the following can you relate with sky?



(1)




(2)

(3) Both (1) & (2)

(4) None of these

13. Which of the following is a creeper?

(1)



(2)



(3)



(4) None of these

14. Select the incorrect one

- (1) Cow - Calf
- (2) Lion - Kitten
- (3) Tiger - Cub
- (4) None of these

15. Which of the following change shape when air is filled?

- (1) Balloon
- (2) Cycle Tyre
- (3) Ball
- (4) All of these

16. Which pair of animal provides us with same type of useful things?

- (1) cow, horse
- (2) hen, duck
- (3) goat, sheep
- (4) None of these

17. Which fruit can provide with sweet water?

(1)



(2)



(3)



(4) None of these

18. Which of the traffic rule is correct?

- (1) You should walk when signal is red.
- (2) You should cross the road by zebra crossing.
- (3) You should not walk in footpath
- (4) None of these

19. Which is present in many nos. in sky?

- (1) Sun
- (2) Moon
- (3) Stars
- (4) None of these

20. Which of the following food is not good for health?




- (1) Pizza
- (2) Rice
- (3) Milk
- (4) None of these

INTERACTIVE SECTION




21. Which of the following animal will give you protein rich product?


- (1) Cow
- (2) Horse
- (3) Dog
- (4) None of these

22. Which of the following form of water is cold?

- (1) 
- (2) 
- (3) 
- (4) None of these

23. Which of the following animals will kill the above one?

- (1) 
- (2) 
- (3) 






- (3)
- (4) None of these

24. Which of the following is a planet

- (1) Mercury
- (2) Sun
- (3) Moon
- (4) None of these

25. Which of the following fruits can provide with maximum water?

- (1) 
- (2) 
- (3) 
- (4) None of these



END OF THE EXAM