



EHF
LEARNING FOR LIFE

**EDUHEAL
FOUNDATION**

**CLASS
1**

LEVEL - 1

Set A1

EHF OLYMPIADS

- 4000 schools • 6 lakh students
- 11 olympiads • Global reach



EHF

**NATIONAL INTERACTIVE
SCIENCE OLYMPIAD**

Name :

Roll No :


Class :

School :



art and sports clinic contest

**NATIONAL
BIOTECHNOLOGY
OLYMPIAD**




**NATIONAL
INTERACTIVE
MATHS
OLYMPIAD**



**NATIONAL
INTERACTIVE
SCIENCE
OLYMPIAD**



**INTERNATIONAL
CYBER
OLYMPIAD**



**INTERNATIONAL
ENGLISH
OLYMPIAD**



**INTERNATIONAL
GENERAL KNOWLEDGE
OLYMPIAD**



BSE
INVESTORS' PROTECTION FUND

BSE international finance olympiad (BIFO)



NATIONAL IIT-PMT OLYMPIAD (NIPO)

Instructions for the Candidate

1. You are allowed additional 10 minutes to fill the required details in the RESPONSE SHEET (OMR).
2. The question paper is made as per syllabus guidelines & pattern given in the information Booklet. The Question Paper for Classes 1 to 6 contains 40 Questions each to be answered in 60 minutes. The Question paper for classes 7 to 11 contains 60 Questions each to be answered in 60 minutes. All questions are compulsory. Further instructions are given in the instruction letter to the teacher.
3. Use the response sheet to mark your responses by darkening the required circle. The response sheet has to be returned to the foundation, duly filled in. **THE STUDENT CAN RETAIN THE QUESTION PAPER.**

WEBSITE : WWW.EDUHEALFOUNDATION.ORG
E-MAIL : INFO@EDUHEALFOUNDATION.ORG

ROUGH WORK

GENERAL IQ

1. Which type of an animal is found in the soil?

(1)



(2)



(3)



(4)



2. Which instrument is used to tell direction?

(1)



(2)



(3)



(4)



3. After lunch we eat _____.

(1) breakfast

(2) dinner

(3) brunch

(4) tea

4. Four added to four equals

(1) 5

(2) 18

(3) 8

(4) 10

5. What does a ruler measure?

(1) Length

(2) Weight

(3) Mass

(4) Gas

6. Which device can be used in place of computer?

(1)



(2)



(3)



(4)



7. _____ gives power back up to the computer.

(1)



(2)



(3)



(4)



8. Device helps in doing video chat.

(1)



(2)



(3)



(4)



9. For counting large amount of money we use:

(1)



(2)



(3)



(4)



10. Which device works with electricity?

(1)



(2)



(3)



(4)



GENERAL SCIENCE

11. Which part of a plant produces pollen?

(1)



(2)



(3)



(4)



12. Which of the following is a pet animal?

(1)



(2)



(3)



(4)



13. The sensory organ responsible for tasting the food is our _____

(1)



(2)



(3)



(4)



14. _____ animal eats only dead bodies of other animals.


(1)



(2)



(3)



(4) Both (1) and (2)

15. What type of air do plants breathe?

- (1) Helium (2) Carbon Dioxide
(3) Oxygen (4) Don't breathe

16. _____ moves because of air or wind.

(1)



(2)



(3)



(4)



17. Which is a vegetable?

(1)



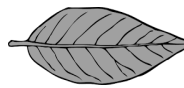
(2)



(3)




(4)



18. What is the Sun?

- (1) Star
(2) Planet
(3) Lamp
(4) Both (1) and (2)



19. Identify this body part:



- (1) Stomach (2) Heart
(3) Lungs (4) Kidney

20. Birds use their _____ to fly.

- (1) fins (2) claws
(3) wings (4) hands

21. The sweet substance made by bees is _____

- (1) cake
(2) honey
(3) ice-cream
(4) sugar

22. The figure represents







- (1) Footpath
- (2) Zebra crossing
- (3) Platform
- (4) Bridge





23. Oceans have _____ water.

- (1) salt
- (2) fresh
- (3) sweet
- (4) bitter


24. Which one is an insect?

- (1) 
- (2) 
- (3) 
- (4) 

25. What does a plant need to grow?

- (1) 
- (2) 
- (3) 
- (4) 

Look at the picture to name the parts of the plant in Q. 26 and Q. 27.



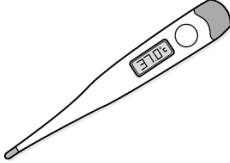



26. Number 2 is the _____ of the plant.

- (1) root
- (2) leaf
- (3) flower
- (4) stem

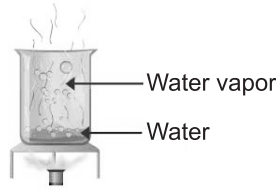
27. Number 4 is the _____ of the plant.

- (1) root
- (2) stem
- (3) leaf
- (4) flower

28. What do you use to take your temperature?

- (1) 
- (2) 
- (3) 
- (4) 

29. What is the state of water vapor?



- (1) Liquid
- (2) Gas
- (3) Solid
- (4) Both (2) and (3)



30. When do you wear the following clothing to go outside?



- (1) Summer
- (2) Winter
- (3) Spring
- (4) Rain

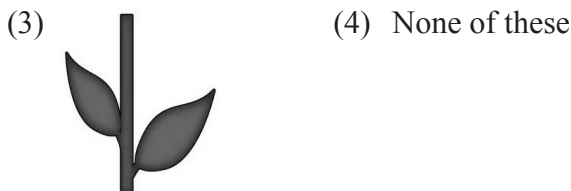

INTERACTIVE SECTION

31. Which of the animals have not reached their home safely?



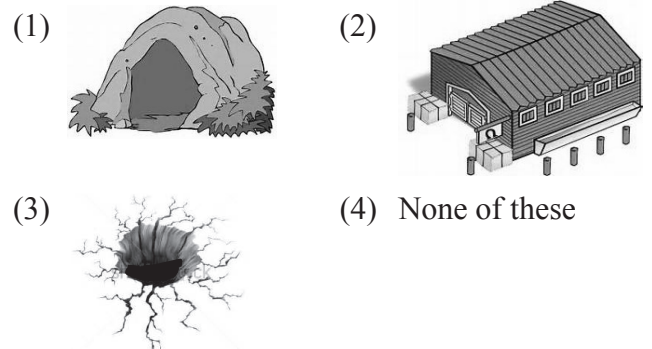
- (4) All of these

32. In the following pictures, which is the part that the bird will not eat, but will help to grow into a new plant?

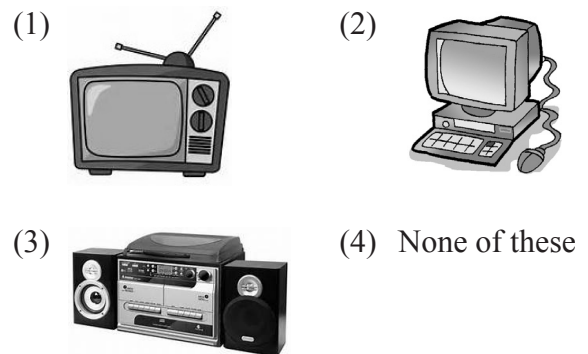


33. You all know about the story of lion and mouse and how the mouse helped the lion and then how they became friends finally. Now can you answer the following question.

The lion stayed in which place?



34. You can relate rat with which device?



35. The bottle of water will be best used for

- (1) Washing
- (2) Bathing
- (3) Drinking
- (4) None of these



36. You went to the market and drank a glass of juice. But the next day you got a bad throat. Which form of water was added to the juice?




(4) None of these

37. If you want to get milk which two animals should you keep?

- (1) cow & goat
- (2) cow & cat
- (3) goat & dog
- (4) none of these

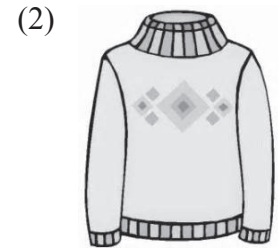
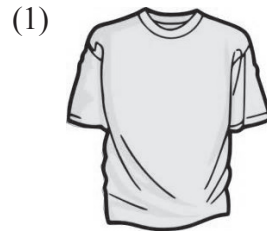
38. Raju was asked to make a project of these animals that he can keep in his house or garden. He got the following chart:



His teacher told, that you should remove one animal from this chart to get your work correct. Which one should he remove?

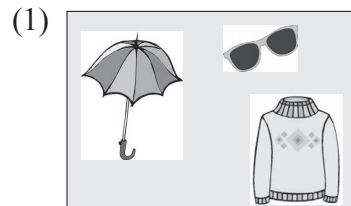
- (1) cat
- (2) rabbit
- (3) rat
- (4) none of these

39. You are going to Shimla (hilly area) with your parents during vacation. Your bag should contain at least one.



(4) None of these

40. During rainy season which box item would you prefer?



(4) None of these



END OF THE EXAM